



Affiliated to CBSE (New Delhi) 10+2 Level

Affiliation No.: 2430130

School Code: 15720

WEEKLY TEST-I

CLASS: 1

SUBJECT: ENGLISH.

FULL MARKS - 10

A) Write the opposites of the following words.

(1×5=5)

- 1) Big 2) Good 3) Near 4) Open 5) Heavy

B) Fill in the blanks with a, an or the.

(1×5=5)

- 1) ----- umbrella
2) ----- sun
3) ----- cup
4) ----- hour
5) ----- ox

WEEKLY TEST-II

SUBJECT: ENGLISH

FM: 10

A) Write the rhyming words of the following.

(1×5=5)

- 1) Can 2) Run 3) Bed 4) Up 5) Cut

B) Fill in the blanks with am, is or are.

(1×5=5)

- 1) I ----- a student.
2) We ----- playing football.
3) They ----- good friends.
4) There ----- a beautiful garden.
5) You ----- a doctor.

WEEKLY TEST-III

SUBJECT: ENGLISH

FM: 10

A) Make sentences with the following doing words.

(1×5=5)

- 1) Go 2) Run 3) Play 4) Eat 5) Cry

B) Fill in the blanks with has or have.

(1×5=5)

- 1) I ----- a book.
2) We ----- many toys.
3) They ----- five balloons.
4) You ---- a bottle.
5) It ----- a long tail.

WEEKLY TEST-IV

SUBJECT: ENGLISH

FM: 10

A) Rearrange the jumbled words to make sentences. .

(1×5=5)

- 1) am student a i
- 2) is playing he football
- 3) good friends are they
- 4) is car this a
- 5) are many books there

B) Fill in the blanks with a or an.

(1×5=5)

- 1) ---- book
- 2) ---- onion
- 3) ---- cup
- 4) ----- bottle.
- 5) ---- apple

WEEKLY TEST-I

SUBJECT: MATHEMATICS

FM – 10

A. Fill in the blanks with appropriate word:-

(4×1)=4

1. A figure with 3 sides is known as a _____.
2. When any number is multiplied by 0, the answer is always _____.
3. _____ is the largest three-digit number.
4. _____ is the smallest even number.

B. Solve the story sums:-

(3×2)=6

1. You have 32 copies, your mother gave you another 10 copies. Now your father told you to give 11 copies to your younger brother. Then, how many copies do you have now?

ANS:

2. On a tree there was 34 crows and 21 parrots. Find the total number of birds on the tree.

ANS:

3. In a class, the total student strength was 50. Today 36 students are present, then how many of them are absent?

ANS:

WEEKLY TEST-II

SUBJECT: MATHEMATICS

FULL MARKS -10

A. Complete the pattern:-

(3×2)=6

1.  . _____, _____, _____

2.  . _____, _____, _____.

3.  . _____, _____, _____.

B. Story Sums:-

(2×2)=4

1. Ayana plucked 30 apples from the tree and gave them to her 5 brothers. How many apples did each brother receive?

ANS:

2. In a water park each ticket is for RS.50. How much it will costs for 6 tickets?

ANS:


WEEKLY TEST-III

SUBJECT: MATHEMATICS

FM - 10

A. Look at the picture below and answer the followings:-

(6×1)=6



- The number of grapes are _____.
- The number of kiwi are _____.
- The least number of fruit is _____.
- The total number of fruits are _____.
- The number of apples are _____.
- The number of pear are _____.

B. Write the number names:-

(2×1)=2

- 78 = _____.
- 95 = _____.

C. Ascending order:-

(2×1)=2

- 98, 60, 40, 32 = _____.
- 12, 34, 56, 76 = _____.

WEEKLY TEST-IV

SUBJECT: MATHEMATICS

FM - 10

A. Descending order:-

(2×1)=2

34, 58, 61, 56

21, 10, 58, 95

B. Addition on the number line:-

(2×1)=2

6+7=?

8+3=?

C. Add the amount of money:-

(2×1)=2

RS.56 + RS. 60 + RS. 74 = _____.

RS. 49 + RS. 51 + RS. 20 = _____.

D. Complete the multiplication table:-

(4×1)=4

____ × 3 = 12

5 × _____ = 25

7 × 6 = _____.

_____ × 9 = 81.

WEEKLY TEST-I

SUBJECT: BENGALI

FM - 10

১) এক কথায় উত্তর দাও :

(5×1)

ক) বনে কে ফুল পাড়ে ?

_____।

খ) কারা সারারাত জেগেছিল?

_____।

গ) রামের গায়ে শালের রং কী ?

_____।

ঘ) কে, কালো রাতকে মুছে দিল ?

_____।

ঙ) জলে কি ফুল আছে ?

_____।

২) এলোমেলো বর্ণগুলি সাজিয়ে শব্দ তৈরি করো :

(5×1)

ক) লা মা

খ) দ চাঁ

গ) ল ফু

ঘ) খি পা

ঙ) লী মা ।

WEEKLY TEST-I

SUBJECT: HINDI

FM - 10

ক) आ की मात्रा वाले पाँच शब्द लिखें।

5

ख) इ की मात्रा लगाकर शब्द बनाओ।

5

1) कवता _____

2) सतार _____

3) कतना _____

4) मल _____

১) সঠিক উত্তরের নিচে দাগ দাও :

(6×1)

১.১ টুপি খুলে শাল মুড়ি দিয়ে শুয়ে আছে -

ক) গুপি খ) দিনু গ) টুনি ।

১.২ টুনটুনি বাসা করেছে -

ক) জবা গাছে খ) বেগুন গাছে গ) কুল গাছে ।

১.৩ শেয়ালের হাঁক ওঠে -

ক) রাতে খ) দিনে গ) দুপুরে ।

১.৪ বাদল নামে -

ক) আষাঢ়ে খ) শ্রাবণে গ) আশ্বিনে ।

১.৫ আমাদের _____ চলে বাঁকে বাঁকে -

ক) বড় নদী খ) ছোট নদী গ) মাঝারি নদী ।

১.৬ চুনি মালী _____ জল তোলে -

ক) কুম্ভ থেকে খ) নদী থেকে গ) পুকুর থেকে ।

২) নীচের কথাগুলো দিয়ে একটি করে বাক্য তৈরি করো :

(4×1)

শাল _____ ।

উবু _____ ।

ঝাঁক _____ ।

কিচিমিচি _____ ।

WEEKLY TEST-II

SUBJECT: HINDI

FM - 10

क) ऊ की मात्रा लगाकर शब्द लगाओ।

5

- 1) भाल _____
- 2) सरज _____
- 3) चना _____
- 4) घम _____
- 5) भख _____

ख) ऋ की मात्रा वाले पाँच शब्द लिखें।

5

WEEKLY TEST-III

SUBJECT: BENGALI

FM - 10

১) সঠিক উত্তরের নিচে দাগ দাও:

(5×1)

১.১ কোটা ভরে রাখা হয় -

- ক) ধনে খ) জিরে গ) মৌরি ।

১.২ গৌর এল -

- ক) নৌকা করে খ) বাসে করে গ) পালকি করে ।

১.৩ সৌরিদিদি বসে আছে -

- ক) ভাত নিয়ে খ) ডাল নিয়ে গ) মাছ নিয়ে ।

১.৪ নৌকা বাঁধা আছে -

- ক) নদীর ঘাটে খ) পুকুরে গ) সমুদ্রে ।

১.৫ _____ ভেঙে ডিঙিয়ে যাওয়া কঠিন -

- ক) বরফ খ) পাথর গ) মাটি ।

২) একটি বাক্যে উত্তর দাও :

(5×1)

ক) মাঝনদীতে নৌকা কীসের টানে চলে ?

থ) কারা দলে দলে বেড়ায় ?

গ) কোন মাসে গৌহাটি যেতে হবে ?

ঘ) জেলে কী মাছ ধরে ?

ঙ) কাকে চৌকি আনতে বলা হয়েছে ?

WEEKLY TEST-III

SUBJECT: HINDI

FM - 10

ক) समान तुक वाले शब्द लिखें।

5

1) मैदा :-

2) थैला :-

3) मैया :-

4) बैल :-

5) पैसे :-

ख) ए की मात्रा वाले पाँच शब्द लिखें।

5

WEEKLY TEST-IV

SUBJECT: BENGALI

FM - 10

১) সঠিক উত্তরের নিচে দাগ দাও :

(5×1)

১.১) বাঁদর কে দেখে ভয় পায়- ক) পাঁচ খ) ভোঁদা গ) খাঁদু ।

১.২) পেঁচা ডাকে - ক) আম গাছে খ) জামগাছে গ) কাঁটা গাছে ।

১.৩) বাঁশি বাজায় - ক) কানু খ) কানাই গ) নীলু ।

१.४) बाँकाय काँचा आम नलये हैँके याय - क) यदु थ) दीनु ग) मधु।

१.५) आकाशे बाँके बाँके- क) हाँस थ) बक ग) काक उड़े गेल ।

२) एकटल बाक्ये उतर दाओ :

(5×1)

क) फूल की हय़े डाना मेले दल ?

ख) प्रदीपेर आलो की हल ?

ग) के मेघ हय़े गेल ?

घ) कवल पाथल हय़े कोथाय उड़ते चान ?

ङ) कवल की हय़े माँठ पार हबेन ?

WEEKLY TEST-IV

SUBJECT: HINDI

FM - 10

क) गलनती ललखँ।

5

ख) दलए गए शब्द के उलटे अर्थ ललखँ।

5

1) आज

2) मोटा

3) काला

4) नया

5) दलन

WEEKLY TEST-I

SUBJECT: EVS

FM - 10

A. FILL IN THE BLANKS:

(1×4=4)

1. Desert plants need very less _____.
2. _____ Things cannot feel.
3. Cereals are also called _____.
4. All plants and animals are _____.

B. ANSWER THE FOLLOWING QUESTION:

(2×3=6)

1. What are juicy and fleshy parts of plants called?

Ans:

2. What are big plants called?

Ans.

3. What do living things need to live?

Ans:

WEEKLY TEST-II

SUBJECT: EVS

FM - 10

A. FILL IN THE BLANKS:

(1×4=4)

1. Pigeon and hen eat _____.
2. _____ have six legs.
3. Rabbit lives in a _____.
4. Our body has _____ sense organs.

B. ANSWER THE FOLLOWING QUESTION:

(2×3=6)

1. Name two birds that can swim.

Ans: _____

2. Where do birds live

Ans: _____

3. What does a child grow up to be?

Ans: _____

WEEKLY TEST-III

SUBJECT: EVS

FM - 10

C. FILL IN THE BLANKS:

(1×4=4)

5. _____ let in fresh air and sunlight.
6. _____ makes our bones and teeth healthy and strong.
7. Playing on the _____ is not safe.
8. We should not play with _____ objects.

D. ANSWER THE FOLLOWING QUESTION:

(2×3=6)

4. Why should we follow safety rules?
5. Why do we need a house?
6. Name two kinds of food that we get from plants.

WEEKLY TEST-IV

SUBJECT: EVS

FM - 10

E. FILL IN THE BLANKS:

(1×4=4)

9. Our body needs proper _____ and sleep.
10. Moving air is called _____.
11. _____ have gills to breathe air.
12. Weather keeps _____ every day.

F. ANSWER THE FOLLOWING QUESTION:

(2×3=6)

7. How do we feel on a sunny day?
8. Name two animals that live in water.
9. Where do we need air?

UNIT TEST-I

SUBJECT: ENGLISH

FM - 20

1) Fill in the blanks:-

(1×5)=5

- a) The kite swings with a long _____
- b) Varun loves _____
- c) The moon _____ and smiles.
- d) The child has a shiny _____.
- e) Rhyming word of 'try' is _____.

2) Write T for true and F for false. -

(1×5) = 5

- A) The poet's kite flies high in the sky. _____
- B) Varun loves sandwiches for breakfast. _____
- C) The child has a shiny finger. _____
- D) There are 26 letters in the English alphabet. _____
- E) Opposite word of 'high' is 'soft'. _____

3) Write the naming word.

(1×4=4)

- a) Who treats the sick person? _____

b) Who teaches us in school? _____

c) Which is our national animal? _____

d) Which is our national bird? _____

4) Answer the following questions.

(2×3=6)

a) How does the poet feel at the end of the poem 'My Kite'?

b) What does Mum use to make grilled sandwiches?

c) Write the words using s/es to make many.

i) Watch _____

ii) Rose _____

UNIT TEST-I

SUBJECT: BENGALI

FM - 20

বিভাগ - ক

১) সঠিক উত্তরে টিক (✓) চিহ্ন দাও।

৬×১=৬

ক) ডিঙি চড়ে আসে - (জেলে / চাষি / মাঝি)।

খ) আশা দাদা এলো - (ঢাকা / কাঁথি / কলকাতা) থেকে।

গ) (মাছ গুলি / পাখি গুলি / তারা গুলি) - সারারাত জেগে ছিল।

ঘ) ভোলা মালী - (মালা নিয়ে ছোট্টে / ফুল তোলে / জল আনে)।

ঙ) পাঁকে চেয়ে থাকে - (চিল / মাছরাঙা / বক)।

চ) দাদা হাটে যায় - (তিন টাকা নিয়ে / চার টাকা নিয়ে / পাঁচ টাকা নিয়ে)।

২) এক কথায় উত্তর দাও :

৪×১=৪

ক) ছোট্টো খোকা কী বলে ?

খ) মৌচাকে কী আছে ?

গ) জলে কী ফুল আছে ?

ঘ) পাকা আতার দাম কত ?

৩) বামদিকের সাথে ডান দিকের মিল করো :

৩×১=৩

বাম দিক	ডান দিক
নেমে এলো পথ ভুলে	ধরে হাল
জয় লাল	জলে খেলা করে
মাছ	বেল ফুলে জুঁই ফুলে

৪) 'তারাগুলি' শব্দের 'গুলি' যোগে আরও দুটি শব্দ লেখো।

২×১=২

ग) दो अक्षर वाले पाँच शब्द लिखें।

1 × 5 = 5

1) _____

2) _____

3) _____

4) _____

5) _____

घ) आ की मात्रा लगाकर शब्द बनाए।

1 × 5 = 5

1) मम :-

2) नम :-

3) कक :-

4) खन :-

5) नक :-

UNIT TEST-I

SUBJECT: MATHEMATICS

FM - 20

1) Short questions: -

(10X1)=10

a) Arrange in ascending order- 10,4,6,1

b) Arrange in descending order- 3,9,8,5

c) Circle the bigger number- (i) 4, 7 (ii) 8, 10

d) Circle the smaller number- (i) 1, 5 (ii) 3, 6

e) Rearrange the letter to get the number names-

EREHT=_____ ENO=_____

f) Write in numbers:

14- _____ 18- _____

g) The before number of 20 is- _____

h) 6 girls and 5 boys = _____ children.

i) 7 monkeys and 5 lions = _____ monkeys and lions.

j) 13 is greater than 10 (use symbol) = _____

2) Add or subtract:-**(1x5)= 5**

$$\begin{array}{r} \text{(i)} \quad \text{T} \quad \text{O} \\ 1 \quad 5 \\ + \quad 4 \\ \hline \\ \hline \end{array}$$

$$\begin{array}{r} \text{(ii)} \quad \text{T} \quad \text{O} \\ 1 \quad 6 \\ + \quad 5 \\ \hline \\ \hline \end{array}$$

$$\begin{array}{r} \text{(iii)} \quad \text{T} \quad \text{O} \\ 1 \quad 8 \\ - \quad 8 \\ \hline \\ \hline \end{array}$$

$$\begin{array}{r} \text{(iv)} \quad \text{T} \quad \text{O} \\ 1 \quad 4 \\ - \quad 1 \\ \hline \\ \hline \end{array}$$

$$\begin{array}{r} \text{(v)} \quad \text{T} \quad \text{O} \\ 1 \quad 0 \\ + \quad 4 \\ \hline \\ \hline \end{array}$$

3) Answer the following question:-**(1x5)=5**

a) Bablu had 20 pencils. he gave away 10 pencils to his sister. How many pencils are left with bablu?

Ans :-

b) 4 big monkeys and 3 baby monkeys sit together on a tree. how many monkeys are there?

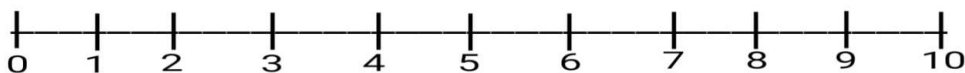
Ans:-

c) Circle the correct answer and do 'RED' colour on it:-

$10+5 = \underline{\quad\quad\quad}?$

- (i) 10 (ii) 12 (iii) 15

Subtract on the number line: $9-4 = \underline{\quad\quad\quad}?$



d) Add on the number line: $2+8 = \underline{\quad\quad\quad}?$



UNIT TEST-I

SUBJECT: EVS

FM - 20

A. FILL IN THE BLANKS CHOOSING THE CORRECT WORDS FROM THE HELP BOX: (1×5=5)

FOOD GRAINS,	SEEDS,	WATER,	CREEPERS,	LIVING THINGS
--------------	--------	--------	-----------	---------------

1. All plants and animals are _____.
2. Desert plants need very less _____.
3. _____ grow along the ground.
4. We get coffee from _____ of the coffee plant.
5. Cereals are also called _____.

B. WRITE T FOR TRUE AND F FOR FALSE: (1×5=5)

1. We get oil from seeds. _____
2. The stems of big trees are strong. _____
3. Leaf of the plant provides support. _____
4. Rocks are natural things. _____
5. We find both living and non-living things around us. _____

C. MATCH THE COLUMN: (1×5=5)

COLUMN A	COLUMN B
1. Coffee	a. tree
2. Mango	b. seed
3. Cactus	c. water
4. Lotus	d. natural thing
5. Air	e. Desert

D. ANSWER THE FOLLOWING QUESTIONS: (1×5=5)

1. What is juicy and fleshy part of plants called?

2. Can non-living things move and feel?

3. Who was lazy ?

- a. Grasshopper b. Ant. C. Cat. D. Fish .

4. Who gives us fresh and clean air?

- a. Earth b. Sun c. Soil d. Trees

5. The ant gave some food to

- a. Ant b. Grasshopper c. Fish d. Cat

C. For true write T and for false write F.

4×1=4

a. The ant was hardworking. _____

B. Grasshopper was bothered about winter. _____

c. Nature is a gift of God. _____

d. The trees give us heat and light. _____

D. Choose the appropriate words from the help box.

6×1=6

The ant :

_____.

The Grasshopper:

_____.

[Help box : intelligent, hardworking, lazy, Chirping ,foolish, kind .]

UNIT TEST-I

SUBJECT: GK

FM - 20

1) Fill in the blanks:-

(10x1)=10

- a) The tallest animal is _____.
- b) 'Meow' is the sound of _____.
- c) Jellyfish is a _____ animal.
- d) King of fruit is _____.
- e) Spices can make food _____.
- f) India's national tree is _____.
- g) Victoria Memorial is located in _____.
- h) The first Prime Minister of India is _____.
- i) I sleep with one eye open, I am _____.
- j) The baby of a pig is called _____.

2) **Write the statement true or false:-**

(5x1)=5

- a) Camel is called the 'Ship of the Desert' = _____.
- b) The sound of Ducks is Quack = _____.
- c) The part of a plant which contain seeds is called flower = _____.
- d) Ginger is a fruit = _____.
- e) Taj Mahal is located in Argra = _____

3) **Match the following:-**

(5x1)=5

Golden Temple
Lotus
Clove
Octopus
Lion

National Flower
Has eight arms
A animal
Located in Amritsar
A spice

UNIT TEST-I

SUBJECT: COMPUTER

FM - 20

A. Choose the correct answer.

(1x5=5)

- 1. Which of these can be done with the help of a computer?
(i) Draw [] (ii) bath [] (iii) sleep []
- 2. Which of these is used to take output on paper?
(i) Monitor [] (ii) printer [] (iii) speaker []
- 3. Which of these looks like a television?
(i) Speaker [] (ii) CPU [] (iii) monitor []
- 4. Pressing the button of a mouse is called _____.
(i) Typing [] (ii) clicking [] (iii) scrolling []
- 5. Which of these is a natural thing?
(i) Cup [] (ii) flower [] (iii) hair band []

B. Write T for true and F for false statements.

(1x5=5)

- 1. We play games on a computer. _____
- 2. Monitor is the brain of a computer. _____
- 3. We can solve sums on a computer. _____
- 4. We can only draw on a computer. _____
- 5. Computer is a natural thing. _____

C. Fill in the blanks.

(1×4=4)

1. A _____ has a long tail.
2. A keyboard has buttons on it called _____.
3. _____ is the longest key on the keyboard.
4. The arrow on the monitor is called _____.

D. Guess my name.

(1×4=4)

1. I give you output on paper. I am the _____
2. I help you to point that things on the monitor. I am the _____
3. I work like the brain of the computer. I am the _____
4. You press my keys to tell the computer what to do. I am the _____

E. Answer the following questions.

(1×2=2)


1. Which key is used to move the cursor to the next line?

Ans: _____

2. Which key is used to give a blank space?

Ans: _____

Colour the picture:-



E. Match the following:-

(1×5=5)

COLUMN A	COLUMN B
F) Rat	g. Round
G) Capsicum	h. Cold
H) Ball	i. Small
I) Mango	j. Sweet
J) Ice	k. Green

F. Give two examples of each:-

(2×5=10)

1. Healthy food for breakfast - _____, _____.
2. 'He - group' - _____, _____.
3. 'She - group' _____, _____.
4. Doing words- _____, _____.
5. Describing Words - _____, _____.

G. Circle the describing word in each set of words.

(1×4=4)

1. blue cow run apple
2. farm play sad boy
3. pencil short pillow television
4. toy coat eat soft

H. Answer the following questions:-

(2×7=14)

1. What does Varun's mother use to make veggie sandwiches?

Ans: _____

2. Why is Grandma delighted?

Ans: _____

HALF YEARLY EXAMINATION

SUBJECT: BENGALI

FM - 60

বিভাগ - ক

১) সঠিক উত্তরে টিক(✓) চিহ্ন দাও :

১৫×১=১৫

ক) দাদা হাটে যায় -- (তিন টাকা নিয়ে / চার টাকা নিয়ে / পাঁচ টাকা নিয়ে)।

খ) আশা দাদার বাসা - (কলকাতায় / নদীর ধারে / গড়পারে)।

গ) ধান খেত জলে _____ ডোবা (আধো / পুরো / গোটা)।

ঘ) ডিঙি চড়ে আসে - (দিদি / চাষি/জেলে)।

ঙ) রনি দিদির কাশি - (পাঁচ দিন/চার দিন / তিন দিন)।

চ) _____ দিয়ে পথ - (তালবন / বাঁশবন / আম বন)।

ছ) দিঘির জল খুব - (হলুদ / নীল / কালো)।

জ) _____ গাছ ঝুঁকে ঝুঁকে পড়ে (বাঁশ / কলা / আম)।

ঝ) _____ পেতে ধান ভানে বুড়ি (ছিপ / টেঁকি / খাট)।

ঞ) পাঁকে চেয়ে থাকে- (বক / মাছরাঙা / চিল)।

ট) _____ ছুটি - (মঙ্গল বার / সোমবার / বুধ বার)।

ঠ) আজ খুব - (গরম / শীত / বৃষ্টি)।

ড) (বৈশাখ মাসে / জ্যৈষ্ঠ মাসে / শ্রাবণ মাসে) তার হাঁটু জল থাকে।

ঢ) কিছু মুড়ি নেবো আর - (ভাত / নুন/ডাল)।

ণ) আমাদের ছোটো নদী চলে - (সাথে সাথে / হেঁটে হেঁটে / বাঁকে বাঁকে)।

২) বন্ধনীর মধ্যে থাকা শব্দ দিয়ে শূন্যস্থান পূরণ করো।

৮×১=৮

(ভর ভর , খর তর , আষাঢ়ে , পাঁক গুলি , ছোটো , ছুটিয়া , মহাবেগে , কোলাহল)

_____ বাদল নামে , নদী _____।

মাতিয়া _____ চলে ধারা _____।

_____ কল কল _____ ওঠে ,

ঘোলা জলে _____ ঘুরে ঘুরে _____।

৩) সাজিয়ে লেখো :

(৮×১=৮)

ধা ল জ রা =

গা সা ন রি =

খা ল রা=

আ ন গু =

ধ বা র বু =

সি তি ত থে =

ব তা ন ল =

টি মি টি মি=

৪) নীচের প্রশ্ন গুলির উত্তর দাও :

৮×১=৮

ক) দিঘির জল কেমন ?

_____।

খ) কার গায়ে লাল জামা ?

_____।

গ) পাকা আতার দাম কত ?

_____।

ঘ) কার তিন দিন কাশি ?

_____।

ঙ) পাখি কি কথা বলে ?

_____।

চ) কে জল আনে ?

_____।

ছ) কী দিয়ে থালা মাজা হয় ?

_____।

জ) কোথা থেকে হিম পড়ে ?

_____।

৫) মিল করো :

৬×১=৬

কুল গাছে

শুয়ে আছে ।

চুনি মালী

বসেছে দোকানে ।

গুপী

টুনটুনির বাসা।

হরি মুদি

কুমো থেকে জল তোলে ।

বুড়ি

ঘুঁটে দেয় ॥

বড়ো বউ মেজো বউ

ভাজে খই মুড়ি ।

বিভাগ - খ

১) অর্থ লেখো :

৫×১=৫

বালক -

দিবস -

গৃহ -

গীত -

নৃপ -

২) উ - কার বসিয়ে নীচের শব্দ গুলি সম্পূর্ণ করো ।

৪×১=৪

কল -

তন -

সখ -

আকল -

৩) ঙ্গ - কার বসিয়ে নীচের শব্দ গুলি সম্পূর্ণ করো :

৪×১=৪

তর -

কট -

শত -

নরস -

৪) এলোমেলো বর্ণ শব্দ গুলিকে সাজিয়ে লেখো :

২×১=২

ত ঘ্ -

প ক্ ণ -

क) व्यंजनों को जोड़कर शब्द बनाइए।

2 × 5 = 10

1) क + म + ल = _____

2) अ + ना + र = _____

3) मा + ला = _____

4) नौ + का = _____

5) ढो + ल + क = _____

ख) ई की मात्रा लगाकर शब्द बनाए। (कोई पाँच)

2 × 5 = 10

1) तस = _____ 3) वर = _____ 5) चल = _____

2) कल = _____ 4) तर = _____ 6) सता = _____

ग) सही शब्द पर गोला लगाओ।

2 × 5 = 10

1) मामी मामि

2) खीर खिर

3) रानी रानि

4) हिरन हीरन

5) मीठी मिठी

घ) चित्र देखिए और सही नाम के सामने सही (√) का निशान लगाइए।


2 × 5 = 10



1) लौकी () करेला () आलू ()



2) जड़ () फूल () पेड़ ()



3) कौआ () तोता () मोर ()



4) कार () बस () रेल ()



5) हाथी () हिरन () शेर ()

ड) एक का अनेख से मिलान करें।

$$2 \times 5 = 10$$

- | | |
|-------------|----------|
| 1) गुब्बारा | लड़के |
| 2) ताला | आँखें |
| 3) कमीज़ | कमीज़ें |
| 4) आँख | गुब्बारे |
| 5) लड़का | ताले |

च) लड़का से लड़की बनाए। (कोई पाँच)

$$2 \times 5 = 10$$

- | | |
|------------|-----------|
| 1) लड़का - | 2) राजा - |
| 3) नाना - | 4) बकरा - |
| 5) चाचा - | 6) दादा - |

1) write the Number names:-

(5x2)=10

a) 50 = _____

b) 78 = _____

c) 86 = _____

d) 69 = _____

e) 94 = _____

2) Write the number in expanded form :-

(5x1)=5

a) 73 = _____ tens + _____ ones = _____

b) 44 = _____ tens + _____ ones = _____

c) 58 = _____ tens + _____ ones = _____

d) 67 = _____ tens + _____ ones = _____

e) 99 = _____ tens + _____ ones = _____

3) Write the ordinal number:-

(5x1)=5



a) Tojo is in the _____ position.

- b) Nisha is in _____ position.
- c) Souvik is in the _____ position.
- d) Rimpa is in the _____ position.
- e) Ranu is in the _____ position.

4) Write the missing numbers :- (10x1)=10

85 _____ 90 _____ 92
 _____ 95 _____ 98 _____ 100

5) Write in ascending order :- (5x1)=5

- a) 49, 94, 14 = _____ b) 61, 91, 71 = _____
 c) 59, 53, 57 = _____ d) 75, 57, 64 = _____
 e) 45, 78, 34 = _____

6) Write in descending order:- (5x1)=5

- a) 40, 20, 60 = _____ b) 47, 44, 49 = _____
 c) 92, 32, 72 = _____ d) 43, 83, 93 = _____
 e) 42, 76, 39 = _____

7) Choose the correct answer and write:- (5x1)=5

- a) The correct spelling of 14 is _____
 (i) Forteen (ii) fourteen (iii) fortin (iv) fortinn
- b) The right expanded form of 93 is = _____
 (i) 9 tens + 3 ones = 90 + 3 (ii) 90 tens + 3 ones = 9 + 3
 (iii) 3 tens + 9 ones = 3 + 9 (iv) 9 tens + 3 ones = 9 + 3

c) The shape of a Globe is like a _____.

- (i) Triangle (ii) Circle (iii) Rectangle (iv) Square

d) 10 tens means _____.

- (i) 30 (ii) 10 (iii) 50 (iv) 100

e) The correct answer for $32+27$ is = _____.

- (i) 54 (ii) 59 (iii) 64 (iv) 42

8) Answer the following questions:-

(5x2)=10

a) T O

 2 6

+ 5 3

b) T O

 4 4

- 1 2

c) T O

 2 9

- 1 3

d) T O

 6 7

+ 1 2

e) T O

 8 9

- 4 3

9) Draw a circle, a rectangle, a square, an oval, a triangle and colour. **(5x1)=5**

E. Match the following:-

(1×5=5)

COLUMN A	COLUMN B
1. Eats plants	a. Bees
2. Eats insects	b. Fish
3. Make hives	c. Giraffe
4. Kept in an aquarium	d. Ants
5. Found in an anthill	e. Frog

F. Give two examples of each:-

(2×5=10)

1. Animals that eat both flesh and plants - _____, _____.
2. Birds that cannot fly- _____, _____.
3. Animals that eat other animals- _____, _____.
4. Parts of plant- _____, _____.
5. Insects- _____, _____.

G. Answer the following questions:-

(2×10=20)

1. Why do animals need shelter?

Ans: _____

2. What are predators?

Ans: _____

3. What is habitat?

Ans: _____

4. What are big plants called?

Ans: _____

5. What do living things need to live?

Ans: _____

6. Name the organ that helps to taste food.

Ans: _____
_____.

7. Name two animals that have natural shelters.

Ans: _____
_____.

8. Name two birds that can swim.

Ans: _____
_____.

9. Name two vegetables we eat raw.

Ans: _____
_____.

10. Name two animals live on both land and in water.

Ans: _____
_____.

H. Draw:-

(2×2=4)

1. An animal that lives in water.

2. Organ that help us to taste things.

A) Fill in the blanks:-

(20x1)=20

- 1) _____ is called 'The Ship of Desert'.
- 2) The baby of a frog is called _____.
- 3) The sound of an owl is _____.
- 4) 'I am the largest animal in the world'. My name is _____.
- 5) _____ is the largest tree borne fruit.
- 6) Ginger is a _____.
- 7) Sugar is obtained from _____.
- 8) The name of our motherland is _____.
- 9) _____ is our National Anthem.
- 10) Char Minar is located in _____.
- 11) Birla Mandir is situated in _____.
- 12) He was a patriotic saint and a spiritual leader, he is _____.
- 13) _____ is called Dakshin Ganga.
- 14) _____ is the capital of Maharashtra.
- 15) _____ is known as the 'Cultural capital of India'.
- 16) The currency of China is _____.
- 17) Jains worships in a _____.
- 18) _____ is called the 'Spice garden of India'.
- 19) _____ is known as the 'Iron man of India'.
- 20) The national fruit of India is _____.

B) Answer the following question:-

(15x2)=30

1) 'I am a animal, my sound is Quack'- who am i?

Ans:- _____.

2) What is the name of a pig's baby?

Ans:- _____.

3) Taj Mahal is located where?

Ans:- _____.

4) Which water animal can sleep with one eye open?

Ans:- _____.

5) Which is the main river of Assam?

Ans:- _____.

6) What is the India's national emblem?

Ans:- _____.

7) Where Gateway of India is located?

Ans:- _____.

8) Who was the first prime minister of India?

Ans:- _____.

9) Chandigarh is the capital of two states. What are they?

Ans:- _____.

10) Which city is called the 'Silicon valley of India'?

Ans:- _____.

11) What is the old name of Patna?

Ans:- _____.

12) What is the name of the currency of Germany?

Ans:- _____.

13) Who formed Azad Hind Fauj?

Ans:- _____.

14) What is our national bird?

Ans:- _____.

15) What is the sound of a mouse?

Ans:- _____.

C) Match the following:-

(10x1)=10

Babies of cat	capital of Telengana
A water animal	Located in Delhi
Marina Beach	National tree
Pink city	Bhagat Singh
Rial	Kitten
Banyan	Located in Chennai
Qutub Minar	Octopus
Shaheed	Jaipur
Ganga	Currency of Iran
Hyderabad	Haridwar is located on the bank of This river

HALF YEARLY EXAMINATION

SUBJECT: M.SC.

FM - 60

A. Fill in the blanks with the words given in the help box:-

(10×1=10)

1. Nature is a gift of _____.
2. The dove saved the life of the _____.
3. There was a small village on the banks of _____ river.
4. The ant was very _____.
5. We should do yoga at _____.
6. Kunal handed over a _____ to the monkey.
7. The hunter was aiming his gun at the _____.
8. Yoga builds our _____ power.
9. Yoga was originated in _____.
10. Ant got swayed into the _____.

[Help Box- Ant, Hardworking, Morning, God, Monkey, Concentration, Dove, India, River.]

B. Write the meanings of the words:

(10×1=10)

Roaming _____

Creature _____

Responsibility _____

Vast _____

Stung _____

World _____

Grab _____

Climb _____

Groom _____

Asana _____

C. Write T for true and F for false statement:

(10×1=10)

1. We should always be kind to animals- _____
2. Yoga is an ancient art of India- _____
3. The grasshopper was very hard working- _____
4. We must not forget to protect our nature- _____
5. The dove never helped the Ant- _____
6. People give injections to their pet animals to keep them healthy- _____
7. We should do yoga after eating- _____
8. We should never fight with a friend- _____
9. We should cut trees- _____
10. Yoga makes us strong and healthy- _____

D. Answer the following in detail:

(10×2=20)

1. How did the dove help the end to get out of the water?

2. What happened when kunal handed over a banana to the monkey?

3. What is the meaning of yoga?

4. Why did aunt ignore the foolish dress offer and continue to store food?

5. What do we get from plants?

6. Write two benefits of yoga.

7. Why should we take care of animals?

8. What do you do when you see your friend in trouble?

9. How old was kunal? Where did he live?

10. What should we do for a healthy body?

E. Match the following:

(10×1=10)

Goodness with mindfulness -

Ant, grasshopper

The wise ant-

dove, Ant.

Goodness is an-
Investment

Kunal, the monkey

Nature: boon for us-

builds our stamina

Yoga is fun-

nature, the sun, the moon

Prana-

honey

Originated-

breath

Boon-

started

Honey bee-

blessing

Choose the correct option.

5×1=5

1. Which tool is used to close the Tux Paint.
 (i) New (ii) Paint (iii) Quit
2. Typing without looking at the keyboard is known as ___ typing.
 (i) Blind (ii) Touch (iii) Memory
3. Which of these fingers do we use to scroll the mouse?
 (i) Middle (ii) Index (iii) Ring
4. Which of these is used to take output on paper?
 (i) Monitor (ii) Printer (iii) Speaker
5. Which key is used to delete the words to the left of the cursor?
 (i) Backspace (ii) Shift (iii) Enter

B. Fill in the blanks.

5×1=5

1. In the _____, the Tux penguin gives suggestions.
2. The arrow on the monitor is called _____.
3. Pressing the button of a mouse is called _____.
4. A keyboard has buttons on it called _____.
5. We use backspace key to erase letters to the _____ of the cursor.

C. Write T for true and F for False.

5×1=5


- 1) The letter to be typed is highlighted in a box. _____
- 2) Rapid typing makes typing very difficult. _____
- 3) Spacebar key is used to type capital letters. _____
- 4) Number keys are used to type letters. _____
- 5) The arrow on the monitor is called pointer. _____

D. Rearrange the letters and make meaningful words.

5×1=5

1. TNERE: _____
2. SAPECBCAK: _____
3. SATUST RAB: _____

Colour the Peacock:-



1) Fill in the blanks:-

(1x5)=5

- f) Five little seeds are waiting to _____
- g) We _____ good friends.(Use am/is/are)
- h) The fruits of the banyan tree are very _____.
- i) Rhyming word of 'five' is _____.
- j) They _____ big balloons.(Use has/have)

2) Write T for true and F for false.-

(1x5)= 5

- K) Three seeds will make flowers. _____
- L) A farmer is working on his watermelon field. _____
- M) Opposite word of 'tall' is 'short'. _____
- N) Watermelons grow on trees. _____
- O) The word 'weed' means 'a wild plant'. _____

3) Circle the describing word.

(1x4=4)

- a) The mango is very sweet.
- b) Sima's frock is red.
- c) The elephant is big.
- d) There are four bananas.

4) Answer the following questions.

(2x3=6)

a) Which two words describe the weeds ?

b) Describe the banyan tree.

c) Make sentences with the following doing words.

- i) Drink _____
- ii) Run _____

UNIT TEST-II

SUBJECT: BENGALI

FM - 20

"কাল ছিল ডাল খালি" কবিতাটি প্রথম স্তবক কবির নাম সহ মুখস্থ লেখ।

৫

কবিতার নাম _____

কবির নাম _____

২. সঠিক বিকল্প বেছে লেখো:-

8

ক) শৈল আসে (ভেলা/ গাড়ি/ হেঁটে) চড়ে।

খ) দৈ দেয় নি (গয়লা/ময়রা/শৈল) ।

গ) (শৈল/ কৈলাস/বেনী) র আজ পৈতে।

ঘ) গাধা (ছোলা/ গম/ চাল) খেতে ভালোবাসে।

৩. এলোমেলো শব্দগুলি ঠিক করে লেখ :-

8

ক) তা ড়ি ড়া তা _____,

খ) লা য় গ _____,

গ) ছি কা ছা কা _____,

ঘ) মে চি চেঁ চা _____

৪. প্রশ্নের উত্তর লেখ

(8×5=8)

ক) গয়লা কখন দৈ দেবে ?

ख) नैहाटिडे अखन के थाके?

ग) डोवार जल केमन ?

घ) कार पिठे डोरा दाग?

५. निर्देश अनुसार लेख :-

७

क) ए कार योगे दुटि शब्द लेख

_____ , _____

ख) ऐ कार योगे दुटि शब्द लेख

_____ , _____

ग)उ कार योगे दुटि शब्द लेख

_____ , _____

UNIT TEST-II

SUBJECT: HINDI

FM - 20

क) ए (े) की मात्रा वाले पाँच शब्द लिखें।

1 × 5 = 5

1) _____ 2) _____ 3) _____

4) _____ 5) _____

ख) मिलाइए। को शब्दों निम्नलिखित

1) चटपटी अंगूर

2) खट्टे नीम

3) कड़वा चाट

4) मीठी पत्ते

5) हरे मिठाई

ग) उचित शब्द लिखकर वाक्य पूरे कीजिए।

1 × 10 = 10

- 1) _____ प्रतिदिन विद्यालय जाता हूँ। (मैं / तुम ,)
- 2) _____ पढ़ना अच्छा लगता है। (वह / उसे)
- 3) _____ चार मित्र हैं। (उसके / तू)
- 4) _____ आपस में कभी लड़ाई नहीं करते। (यह / वे)
- 5) _____ सब मिलकर खेलते भी हैं। (वह / हम)
- 6) _____ आम अच्छे लगते हैं। (मीठे / कड़वे)
- 7) _____ सब्जियाँ खानी चाहिए। (सफेद / हरी)
- 8) नाना _____ घूमने गए। (चूहा / नानी)
- 9) करेला _____ होता है। (मीठा / कड़वा)
- 10) शेर _____ गुफा में रहते हैं। (शेरनी / मोरनी)

UNIT TEST-II

SUBJECT: MATHEMATICS

FM - 20

A) Fill in the blanks:-

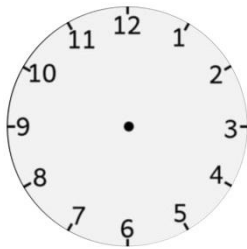
(4x1)=4

1. $7+3+4=$ _____.
2. Rs. 24+ Rs 10 + Rs 30=_____.
3. The fifth day of a week is _____.
4. One hour means _____ minutes.

B) Answer the following:-

(8x2)=16

5. Show the time: 6 O'Clock



6. Rs 50 + Rs 50+ Rs 2= _____.

$$\begin{array}{r} 7. \text{ a) } T \ O \\ 5 \ 0 \\ -2 \ 0 \\ \hline \\ \hline \end{array}$$

$$\begin{array}{r} 7. \text{ b) } T \ O \\ 9 \ 1 \\ -4 \ 7 \\ \hline \\ \hline \end{array}$$

$$\begin{array}{r} 8. \text{ a) } T \ O \\ 1 \ 3 \\ + 5 \ 8 \\ \hline \\ \hline \end{array}$$

$$\begin{array}{r} 8. \text{ b) } T \ O \\ 7 \ 6 \\ + 1 \ 9 \\ \hline \\ \hline \end{array}$$


9. There are 31 boys and 42 girls in the class. Find the total numbers of boys and girls in the class.

ANS:

10. This month is December. What was the previous month? What will be the next month?

ANS:

11. Circle which is the bigger one:-



12. Measure the amount of money:-



UNIT TEST-II

SUBJECT: EVS

FM - 20

E. FILL IN THE BLANKS CHOOSING THE CORRECT WORDS FROM THE HELP BOX:

(1×5=5)

STRONG,	WINDOWS,	COTTON,	SHARP,	QUEUE
---------	----------	---------	--------	-------

6. Food helps us to become _____ and healthy.
7. We wear _____ clothes in summer.
8. _____ let in fresh air and sunlight.
9. We should always walk in a _____ at school.
10. We should not play with _____ objects.

F. WRITE T FOR TRUE AND F FOR FALSE:

(1×5=5)

11. We should always follow the safety rules. _____
12. Silk worms give us milk. _____
13. Healthy food can make us sick. _____
14. Milk is used to make butter. _____
15. We should get into a moving bus. _____

G. MATCH THE COLUMN:

(1×5=5)

COLUMN A	COLUMN B
11. Eating	a. Kitchen
12. Sleeping	b. Dining room
13. Cooking	c. Bedroom
14. Watching TV	d. Bathroom
15. Bathing	e. Drawing room

H. ANSWER THE FOLLOWING QUESTIONS:

(1×5=5)

16. What makes our teeth and bones strong?

17. Write any one good food habit.

18. Write one safety rule at home.

19. Whom should you inform when you or someone else gets hurt?

20. What should we use to cross the road?

UNIT TEST-II

SUBJECT: G.K

FM - 20

C) Fill in the blanks:-

(5x1)=5

13. A house on wheels is called _____.

14. A play item in park is _____.

15. A painter uses the tool _____.

16. The organ helps us to taste such as sweet, salty, sour is _____.

17. _____ is known as the 'Brain of Computer'.

D) Answer the following:-

(5x2)=10

18. What is the name of a temporary house?

Ans:- _____.

19. Who makes earthen pots with the help of a special type of wheel?

Ans:- _____.

20. Who uses Pliers?

Ans:- _____.

21. Write one prevention of corona virus?

Ans:- _____.

22. What does Nose help us?

Ans:- _____.

E) Match the following:-

(5x1)=5

- | | |
|--------------------------------|----------------------------|
| 23. House boats | a. Blacksmith |
| 24. The fastest train in India | b. Helps you in thinking |
| 25. Hammer | c. Floating house on water |
| 26. Brain | d. CPU |
| 27. Processor | e. Vande Bharat Express |

UNIT TEST-II

SUBJECT: M.SC.

FM - 20

Write the meaning of the following words (Any five)

(5×1=5)

1. Wound: _____
2. Herb: _____
3. Habits: _____
4. Stomach: _____
5. Apologize: _____
6. Pledge: _____

B. Choose the correct answer

(5×1=5)

1. The name of the boy was _____
a) Keshav b) Raghav c) Kunal d) Raman
2. At first Raghav saw a _____ on his way.
a) Old man b) dog c) deer d) rabbit
3. Keshav got an _____ infection.
a) Eye b) stomach c) skin d) Ear
4. _____ did not like to share anything.
a) Keshav b) Naman c) Raghav d) Kunal
5. Raghav had hurt his _____.
a) Hands b) Legs c) Cheeks d) Fingers

C. Answer the following questions

(5×2=10)

1. What kind of family did Raghav belong to?

Ans:

2. What kind of habits Keshav had?

Ans:

3. What kind of boy was Naman?

Ans:

4. Who shared the racket with Naman?

Ans:

5. Who helped Raghav to get rid from the wound?

Ans:

1. Choose the correct option.**(1×3=3)**

a. What will be the next number in the given series? 11, 22, 33, 44, _____.

- i) 50 ii) 55 iii) 45

b. In which group, colours in Paint are present?

- i) Size ii) Colours iii) Shapes

c. The shapes that we use in paint art in the shapes _____.

- i) Tab ii) Group iii) Ribbon

2. Fill in the blanks.**(1×4=4)**

a. We select shapes from the _____ tab.

b. A set of letters arranged from left to right in a word search makes a _____.

c. A set of tools which do similar work is called a _____.

d. A triangle has _____ sides.

3. Write T for true and F for false statements.**(1×3=3)**

a. We use oval shape to draw a circle.

b. Paint program helps us to make drawings on a paper.

c. A circle has two curved sides.

4. Answer the following questions.

(2×5=10)

a. In which shape all four sides are equal?

Ans: _____

b. In a rectangle which sides are equal?

Ans: _____

c. Which shape is used to draw squares?

Ans: _____

d. Which shape is used to draw circles?

Ans: _____

e. Which type of figure is a circle?

Ans: _____

UNIT TEST-II

SUBJECT: DRAWING

GRADE: A/B/C

Colour the frock:-



D. Match the animals with their sounds:-

(1×5=5)

COLUMN A	COLUMN B
P) Dog	l. Croaks
Q) Lion	m. Barks
R) Cow	n. Neighs
S) Frog	o. Roars
T) Horse	p. Moos

E. Fill in the blanks with has or have-

(1×5=5)

- I ----- a book.
- He ----- four pencils.
- We ----- many toys.
- It ----- a long tail.
- You ----- many dresses.

F. Circle the describing word in each sentence.

(1×4=4)

- The mango is very sweet.
- Tina's frock is red.
- These kittens are very cute.
- Rohit's shoes are wet.

G. Answer the following questions: -

(2×10=20)

- Why does the farmer wake up with a start?

Ans: _____

- Write the meaning of the word ' Hidden '.

Ans: _____

- Where did the crow go with the cheese?

Ans: _____

4. Why did the little bird say no to the cat?

Ans: _____

5. What happened when the Wind blew hard?

Ans :- _____

_____.

6. Circle the correct preposition.

i) I pack my books (in/ under) my bag every day.

ii) Humpty Dumpty sat (under/on) a wall.

7. Make a sentence by using the following doing words.

1) Eat _____

2) Run _____

8. Fill in the blanks with am, is or are.

i) He ----- my best friend.

ii) We ----- playing football.

9) Write the opposite words of the following.

i) Tall _____

ii) New _____

10) Write the meanings of the following words.

i) vain _____

ii) shower _____

১. "নদীর ঘাটের কাছে"- কবিতাটি কবির নাম সহ আট লাইন মুখস্থ লেখো।

8

২. সঠিক উত্তরের নিচে দাগ দাও :

(1x 18=18)

২.১ খৈ দিয়ে দৈ মেখে খায়- ক> গৈলা খ> শৈল গ> বৈলা।

২.২ বেণি বৈরাগী থাকে- ক> বরিশালে খ> নৈহাটি গ> চৈবাসা।

২.৩ দৈ দেয়নি- ক> গয়লা খ> ময়রা গ> শৈল।

২.৪ ডাল ভরে যায়- ক> ফলে খ>ফুলে গ>পাতাতে।

২.৫ থাকে ওরা_____ পেতে- ক> কান খ>নাক গ>হাত।

২.৬ সে ঘর আছে- ক> পাতালে খ>আকাশে গ>মাটিতে।

২.৭ কোটা ভরে রাখা হয়- ক> ধনে খ>জিরে গ>মৌরি।

২.৮ গৌহাটি যেতে হবে- ক> পৌষ মাসে খ>মাঘ মাসে গ>চৈত্র মাসে।

২.৯ সৌরি দিদি বসে আছে- ক> ডাল খ>ভাত গ>মাছ নিয়ে।

২.১০ নৌকা বাঁধা আছে- ক> নদীর ঘাটে খ>পুকুরে গ>ডোবাতে।

২.১১ ভাটার টানে চলে- ক> নৌকা খ>জাহাজ গ>বাস।

২.১২ সারে সারে দাঁড়িয়ে- ক> আম বন খ>নারিকেলের বন গ>শালবন।

২.১৩ বাঁশি বাজায়- ক>কানু খ>কানাই খ> নীলু।

২.১৪ পেঁচা ডাকে- ক> কাঁটা গাছে খ>জাম গাছে গ> বট গাছে।

২.১৫ ঝাঁকায় আছে- ক> কাঁচা আম খ>কাঁচা পেয়ারা গ> কাঁচা কলা ।

২.১৬ রোজ রোজ ভাবে বসে- ক> সূর্যের আলো খ>প্রদীপের আলো গ>চাঁদের আলো ।

২.১৭ চুপ করে থাকি ভাবে- ক> পুকুরের জল খ>ডোবার জল গ>নদীর জল ।

২.১৮ মাঠ পার হব- ক> ঘোড়া হয়ে খ>পাখি হয়ে গ> মাছ হয়ে।

৩. নিচের কথাগুলো দিয়ে বাক্য তৈরি করো:

(1x4=4)

নতুন_____

নৌকা_____

বনে_____

মুখ_____

৪. ফাঁকা ঘরে বিপরীত শব্দ লেখ:

(1x5=5)

খালি_____, ঘরে_____ ,

ঢেকে_____, মোটা_____ ,

আসা_____।

৫. এলোমেলো বর্ণ সাজিয়ে শব্দ তৈরি করো:

(1x5=5)

রি মৌ_____, কো নৌ_____, টা ভাঁ_____

দ চাঁ_____, না কি জো_____।

৬. একটি বাক্যে উত্তর দাও:

(1x10=10)

ক) গয়লা কখন দৈ দেবে?

_____।

খ) খালি ডাল কীসে ভরে যায়?

_____।

গ) গৌর কী করে এলো?

_____।

ঘ) কি ভেঙে ডিঙিয়ে যাওয়া কঠিন?

_____।

ঙ) লাফ দিয়ে বাঁদর কোন গাছে গেল?

_____।

চ) কে মেঘ হয়ে গেল?

_____।

ছ) কেমন দৈ চাই?

_____।

জ) কোথায় ওরা কান পেতে থাকে?

_____।

ঝ) গৌরের হাতে কৌটোয় কী আছে?

_____।

ঞ) কারা দলে দলে বেড়ায়?

_____।

৭. "ও-কার" ও "ঔ-কার" যোগ করো :

(1×5=5)

চর+ ো_____, লভ+ ো_____, দড়+ ৌ_____

লহ+ ৌ_____, সরভ+ ৌ_____।

৮. উপযুক্ত বর্ণ বসিয়ে ফাঁকা ঘর পূরণ করো:

(1×5=5)

_____ধু, বি_____র, অ_____কার, অনু_____বন,

বা_____।

खण्ड- क

1. औ की मात्रा वाले पाँच शब्द लिखें।

2×5 =

10

क) _____ ग) _____

ख) _____ घ) _____ इ) _____

2. चित्रों को उनके नाम से मिलाओ।


1×5 = 5




शंख



पतंग



बंदर



पंखा



हंस

3. दिए गए शब्दों से खाली स्थान भरौ।

1×5 = 5

(पुनः, प्रातः, स्वतः, नमः, शनैः शनैः)

क) मैं _____ छह बजे उठता हूँ।

ख) कछुआ _____ चलता है।

ग) सुबह उठकर सबको _____ करो।

घ) _____ अपना पाठ पढ़ो।

इ) मैं _____ चला जाऊँगा।

4. निम्नलिखित प्रश्नों के उत्तर लिखो।

2 × 5 = 10

क) क्षत्रिय क्या लेकर आया ? (कृपाण/ किताब)

उत्तर:- _____

ख) क्षत्रिय किसकी रक्षा करता था? (आश्रम / यज्ञ)

उत्तर:- _____

ग) छात्र कहाँ पढ़ने आते थे ? (घर / आश्रम)

उत्तर:- _____

घ) मुनि छात्रों को क्या सुनाते थे ? (कथा / कविता)

उत्तर:- _____

ङ) शिवजी के पास क्या रहता है? (तिरशूल / त्रिशूल)

उत्तर:- _____

खण्ड- ख

(व्याकरण)

1. दिए गए शब्दों के उलटे अर्थ लिखें। (कोई पाँच)

2 × 5 = 10

क) आगे - _____

ख) दिन - _____

ग) ऊपर - _____

घ) छोटा - _____

ङ) आज - _____

च) अच्छा - _____

2. दिए गए शब्दों के समान अर्थ लिखें। (कोई पाँच)

2 × 5 = 10

क) आँख- _____

ख) घर- _____

ग) माँ- _____

घ) सूर्य- _____

ङ) फूल- _____

च) जल- _____

3. गिनती लिखें।

1 × 10 = 10

i) _____ ii) _____ iii) _____ iv) _____ v) _____ vi) _____

vii) _____ viii) _____ ix) _____ x) _____

1) Fill in the blanks:-**(5x1)=5**

- a) Which is bigger: your cubit or your handspan? _____
- b) The clock face has _____ number on it.
- c) The last day of the week is _____.
- d) $1+0+9 =$ _____.
- e) $12-10 =$ _____.

2) Write down the number names:-**(5x2)=10**

- a) $68 =$ _____.
- b) $72 =$ _____.
- c) $19 =$ _____.
- d) $95 =$ _____.
- e) $84 =$ _____.

3) Horizontal Addition:-**(5x1)=5**

- a) $7+3+4 =$ _____.
- d) $3+3+3 =$ _____.
- b) $5+4+1 =$ _____.
- e) $3+2+2 =$ _____.
- c) $6+1+2 =$ _____.

4) Read the questions carefully and solve the story sums:-**(6x2)=12**

- a) In a box there was 41 chocolates. Rohan gives 9 chocolates to his friend. Now how many chocolates are left with Rohan?

- b) On a tree there was 11 crows and 19 parrots. Find the total number of birds on the tree.
- c) Ayat has 20 green marble and Arushi have 30 red marbles. Find the total number of marbles both they have?
- d) In a classroom there was 37 students. Today 19 students are present. Then how many of them are absent today?
- e) You have 3new copies, your father bought you another 3 copies and your mother gives you again 2 copies. Then how many copies do you have now?
- f) You have 32 orange, you gave your brother 22 orange. Now how many orange are left with you now?

5) Circle the bigger one:-

(1x1)=1



6) Circle the shorter one:-

(1x1)=1



7) Calculate the money:-

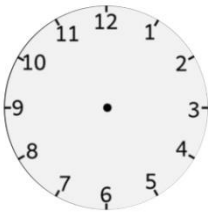
(2x1)=2

a) Rs. 100+ Rs.70+Rs.10 = _____.

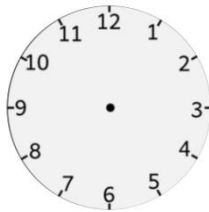
b) Rs. 20+Rs.50+Rs.5 = _____.

8) Show the time in the blank clock given below:-

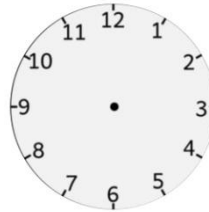
(4x1)=4



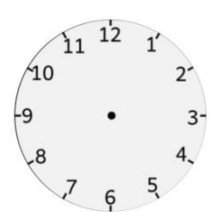
9 o' clock



3 o'clock




12o' clock



5 o'clock

9) Look at the picture and write the answers:-

(5x1)=5



a) The total number of fruits _____.

b) The least number of fruit _____.

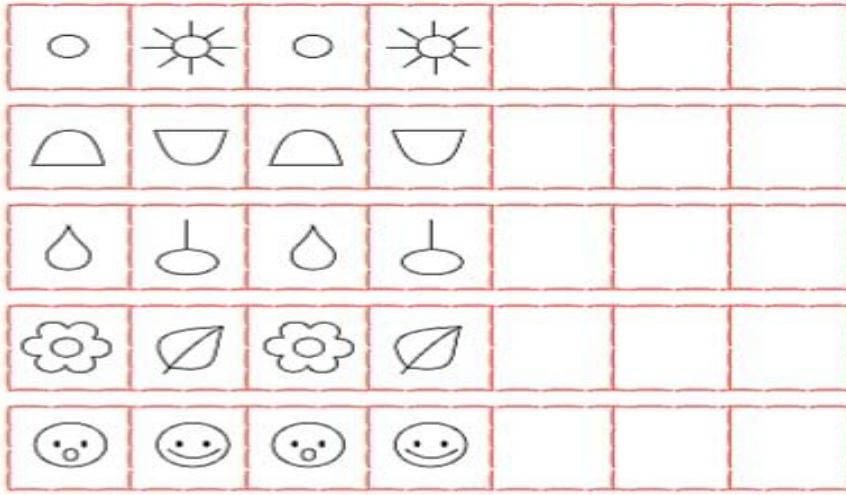
c) The highest number of fruit _____.

d) Number of grapes _____.

e) Number of kiwi _____.

10) Complete the pattern:-

(5x1)=5



11) Complete the multiplication table:-

(5x1)=5

a) _____ x 2 = 4

b) 5x _____ = 25

c) 3 x 6 = _____.

d) 4 x _____ = 40

e) _____ x 2 = 14

12) Skip counting:-

(5x1)=5

42 _____ 45 _____ 47 _____ 50

E. Match the following:-

(1×5=5)

COLUMN A	COLUMN B
6. Food from animals	f. Dustbin
7. Summer	g. Breeze
8. Cross the road on	h. Eggs
9. Throw waste	i. Zebra crossing
10. Gently blowing air	j. Cotton clothes

D. Give two examples of each:-

(2×5=10)

- 6. Food from animals- _____, _____.
- 7. Things made from milk- _____, _____.
- 8. Things that have air filled in them- _____, _____.
- 9. Sources of water- _____, _____.
- 10. Animals that live in water- _____, _____.

E. Answer the following questions:-

(2×10=20)

- 1. Why do we need food?

Ans: _____

_____.

- 2. What are clothes made of?

Ans: _____

_____.

- 3. Why should we keep our surroundings clean?

Ans: _____

_____.

4. How does exercise help us?

Ans: _____

_____.

5. Name two ways in which air is useful to us.

Ans: _____

_____.

6. What is weather? Name different kinds of weather.

Ans: _____

_____.

7. How should we cross the road?

Ans: _____

_____.

8. Why do we need a house?

Ans: _____

_____.

9. Write two good food habits.

Ans: _____

_____.

10. Write two safety rules we should follow at home.

Ans: _____

_____.

F. Draw:-

(2×2=4)

3. Things you use on a rainy day.

2. Traffic lights.

ANNUAL EXAMINATION, 2023-24

SUBJECT: GK

FM - 60

1) Fill in the blanks :-

(20x1)=20

- a) _____ is called the Dwarf planet.
- b) Kho-Kho is a name of _____.
- c) An Indian sports person's name is _____.
- d) _____ asana is very good for the patients of sciatica.
- e) Is the story 'Truthfulness' teaches us about honesty? (yes/no) _____.
- f) _____ gets wetter as it dries.
- g) _____ asana helps to control high blood pressure.
- h) Find the odd one out: pencil, pen, chalk, brick _____.
- i) I rhyme with cat, find me in cricket ground, I am _____.
- j) A giraffe and an ant, who is taller? _____.
- k) _____ is the centre of the Solar system.
- l) CPU is known as the _____ of the computer.
- m) We can use these part of body to walk or run _____.

- n) Barber uses the tool _____.
- o) We can see swings in the _____.
- p) A small kutcha house is called _____.
- q) The largest planet of the Solar system is _____.
- r) A ball name is _____(golf/kuncha).
- s) Mary Kom is a _____ of India.
- t) Rhyming word of 'Dish' is _____.

2) Circle the odd one:-

(5x1)=5

- a) Fish, Chicken, Mutton, Wood
- b) Dolphin, Octopus, Lion, Shark.
- c) Cat, Moon, Fat, Mat.
- d) Hockey, kabbadi, Baseball, Football.
- e) Houseboat, brain, tongue, Nose.

3) Answer the following:-

(10x2)=20

- a) Write down two local sports name?

Ans:- _____.

- b) Write down a name of female sports person in India?

Ans:- _____.

- c) Write down one benefit of Chakrasana?

Ans:- _____.

- d) What was the reward of the woodcutter in the story 'Truthfulness'?

Ans:- _____.

- e) Solve the riddle:- which animal is good in cricket?

Ans:- _____.

- f) Write the rhyming words of FOX and GRAIN?

Ans:- _____.

g) Rewrite the names of planets with correct order:-
Earth, Mercury, Venus, Mars.

Ans:- _____.

h) In Kerala and Kashmir what kind of house can be seen?

Ans:- _____.

i) Write down two names of transports which floats on water?

Ans:- _____.

j) Write the names of the organ which helps to see things around us?

Ans:- _____.

4) Match the following:-

(5x1)=5

a) Brain

(i) Rainbow

b) Mouse

(ii) Part of computer

c) Venus

(iii) Local sport

d) Pithu

(iv) Helps us in thinking

e) The bow can not be tied

(v) Hottest planet

5) One word answer:-

(5x2)=10

a) Rhyming word with 'Moon' - _____.

b) Which one is bigger? (Bus/ Auto) _____.

c) The planet who have ring is _____.

d) Wearing a mask and washing hand is the prevention of _____
(corona virus / game).

e) A big pucca house name is _____.

A. Fill in the blank**(5×2=10)**

1. Pooja finds a big pile of toys and _____.

- a) Balls, b) chocolates, c) books, d) dolls.

2. Naman did not like to _____.

- a) share , b) bath , c) eat , d) read.

3. Keshav got an _____ infection.

- a) skin , b) mouth , c) stomach , d) nose.

4. Raghav had hurt his _____.

- a) Mouth, b) legs, c) foot, d) eyes.

5. We must practice yoga _____.

- a) regularly, b) rarely, c) irregularly, d) monthly.

B. Write the meaning of the word**(5×2=10)**

6) Harb- _____

7) Magic - _____

8) Apologize - _____

9) Delicious - _____

10) Wound - _____

C. Write 'T' for true and 'F' for false.**(5×2=10)**

11) Yoga should be practiced once in a month. _____

12) Helping others gives happiness. _____

13) Yoga increase flexibility. _____

14) The old man help Raghav to be cured. _____

15) Keshav had good habits. _____

D. Match with the correct one.

(5×2=10)

Column A

Column B

16) Serve Each Other

a) Pooja

17) Maintain Hygiene , Stay Fit !

b) Raghav

18) Sharing Makes us Humble

c) Child pose

19) The Magic Words

d) Naman

20) Balasana

e) Keshav

E. Answer the following questions.

(2×10=20)

21) What pledge did keshav take at last?

ANS: _____

22) How did the old man help Raghav?

ANS: _____

23) Moral of the story - "Serve Each Other".

ANS: _____

24) What kind of boy was Naman?

ANS: _____

25) What advice did the doctor give to Raghav?

ANS: _____

26) What were the magic words?

ANS: _____

27) On which thing yoga should be performed?

ANS: _____

28) What kind of family did Raghav belong to?

ANS: _____

29) Why everyone is happy at last?

ANS: _____

30) Write any two cleanliness habits you should follow every day?

ANS: _____

1. Join the dots and colour the picture:-

