



Affiliated to CBSE (New Delhi) 10+2 Level

Affiliation No.: 2430130

School Code: 15720

WEEKLY TEST-I

CLASS: III

SUBJECT: ENGLISH.

FULL MARKS - 10

A) Write the opposites of the following words.

(1×5=5)

- 1) Clever 2) Courage 3) Rich 4) Active 5) Friend

B) Write the past tense of the following words.

(1×5=5)

- 1) Drink
2) Go
3) Eat
4) Play
5) Sing

WEEKLY TEST-II

SUBJECT: ENGLISH

FM: 10

A) Write the meanings of the following words.

(1×5=5)

- 1) Clever 2) Courage 3) Rich 4) Active 5) Ugly

B) Make sentences with the following words.

(1×5=5)

- 1) Drink
2) Go
3) Eat
4) Play
5) Sing

WEEKLY TEST-III

SUBJECT: ENGLISH

FM: 10

A) Fill in the blanks with am, is or are.

(1×5=5)

- 1) It ---- a box.
2) You ----- my friend.
3) He ---- a good student.
4) I ---- a teacher.
5) They ---- playing football.

B) Make sentences with the following words.

(1×5=5)

- 1) Run
2) Go
3) Eat
4) Write
5) Sing

WEEKLY TEST-IV

SUBJECT: ENGLISH

FM: 10

A) Write the past tense of the following words .

(1×5=5)

- 1) Grow
- 2) Sleep
- 3) Run
- 4) Cook
- 5) Sing

B) Make sentences with the following words.

(1×5=5)

- 1) Run
- 2) Go
- 3) Eat
- 4) Write
- 5) Sing

WEEKLY TEST-I

SUBJECT: MATHEMATICS

FM – 10

1. Write 9517 in both words and expanded form. 1
2. Divide 2356 by hundred to find out the quotient and the remainder. 1
3. Write Roman numerals for 47 and 24. 1
4. Draw 6 beads. Colour one-third of the beads. What is the one-third of 6 beads? 1
5. Draw a line segment AB of 8 cm. 1
6. Find the product of the face value and the place value of 5 in 4567. 1
7. Convert 1958 m to km. 1
8. What is the difference between the largest and the smallest three-digit numbers? 1
9. The successor of the greatest four digit number is _____. 1
10. A number is 655 more than 2357. Find out the number. 1

WEEKLY TEST-II

SUBJECT: MATHEMATICS

FULL MARKS -10

1. The expanded form of 7506 is _____. 1
2. $XXXIX = 10+10+10+(\text{_____} - \text{_____}) = \text{_____}$ 1
3. Write Roman numerals for 78 and 54. 1
- 4 Add any three -digit odd number. Is the sum an even or an odd number? 1
5. Subtract 100 from the place value of 5 in the number 1580. 1
6. $2490+4321-5231= \text{_____}$ 1
7. Convert 8709 g to kg. 1
8. Abha drinks 250 ml milk three times a day. How much milk does she drinks in one day? 1
9. The successor of the smallest three digit number is _____. 1
10. I walk 1 km in half an hour. How long will it take me to walk 8 km? 1

WEEKLY TEST-III

SUBJECT: MATHEMATICS

FM - 10

1. Write the fraction with numerator 7 and denominator 10 1
2. $XXV = 10+10+(\text{ }) = \text{ }$ 1
3. Write the numbers in ascending order: 2351, 2471, 2359 and 2364 1
- 4 Multiply 583 by 45 1
5. Divide 9735 by 4. Check if Dividend = Divisor x Quotient + Remainder. 1
6. Continue the pattern Z1, Y2, X3, W4, _____, _____. 1
7. Convert 1 year to months 1
8. The cost of one badminton racket is Rs. 328.75. What will be the cost of 13 such rackets? 1
9. Add 6759, 325 and 58. 1
10. How many edges does a sphere have? 1

WEEKLY TEST-IV

SUBJECT: MATHEMATICS

FM - 10

1. How many faces does a cylinder have? 1
2. A line with one fixed endpoint is called a _____. 1
3. Write the numerator and denominator of five –sixth. 1
- 4 What is the sum of the days of the first three months of a leap year? 1
5. 600 books have been distributed among 30 children. How many books will each child get? 1
6. $2490+4321-5231 = \text{ }$ 1
7. How many months are there in 20 years? 1
8. _____ x 8 = 120 1
9. Subtract Rs. 985.59 from Rs. 1000 1
10. What is the time when the minute hand at 12 and the hour hand at 9? 1

WEEKLY TEST-I

SUBJECT: BENGALI

FM - 10

- ১) সঠিক উত্তরটি খুঁজে নিয়ে লেখো : (4×1)
- ১.১ লেখক সুন্দরবন দেখতে যায় - ক) পুজার ছুটিতে খ) দোলের ছুটিতে গ) গ্রীষ্মের ছুটিতে ।
 - ১.২ সর্দারের নাম - ক) মহেশ খ) গনেশ গ) রঘু ছিল।
 - ১.৩ একদিন _____ সকল দুর্যোগ কাটিয়া গেল- ক) অপরাহ্নে খ) সকালে গ) রাত্রে ।
 - ১.৪ মহেশ সর্দার মস্ত একটা _____ মেরে ছিল- ক) বাঘ খ) হাতি গ) হরিণ ।
- ২) এক কথায় উত্তর দাও : (4×1)
- ক) লেখকের বাবাকোথায় কাজ করতেন?
 - খ) লেখক কার সঙ্গে সুন্দরবন দেখতে গিয়েছিলেন ?
 - গ) লেখক কোথায় হরিণ চরতে দেখেছিলেন ?
 - ঘ) মহেশ সর্দার প্রথমে যে বাঘটা মেরেছিল তার দৈর্ঘ্য কত ছিল ?
- ৩) শব্দার্থ লেখো : (2×1)
- ক) আপাদমস্তক খ) অপরাহ্নে ।

WEEKLY TEST-II

SUBJECT: BENGALI

FM - 10

১) সঠিক উত্তরটি খুঁজে নিয়ে লেখো :

(3×1)

১.১ মাইলস্টোন অনেকটা - ক)গোল বলের মতো খ) বাটনা-বাটা শিলের মতো গ) ছোট্ট বলের মতো ।

১.২ এক মাইল মানে প্রায় - ক) এক ক্রোশ খ) আধক্রোশ গ) দুইক্রোশ ।

১.৩ লেখক প্রতিজ্ঞা করেন যে - ক) অঙ্ক শিখবেন না খ) ইংরেজি শিখবেন না গ) ইংরেজি সংখ্যা চিনবেন।

২) এক কথায় উত্তর দাও :

(3×1)

ক. 'এটি ছয় হইবেক'- সেখানে কত লেখা ছিল ?

খ. স্টোন শব্দটি কোন ভাষার শব্দ ?

গ. মাইলস্টোন কী ?

৩) নিচের শব্দগুলির বিপরীত শব্দ লেখ :

(2×1)

ক. আরম্ভ খ. স্পষ্ট

৪) নিচের শব্দগুলির পদ পরিবর্তন করো :

(2×1)

ক. পাথর খ. নিকট

WEEKLY TEST-III

SUBJECT: BENGALI

FM - 10

১) সঠিক প্রতিশব্দের নীচে দাগ দাও :

(5×1)

ক) সূর্য - আগুন / গিরি / তপন ।

খ) বাতাস - অনিল / সুনীল / নভ ।

গ) মেঘ - দিগম্বর / অম্বর / ঘন ।

ঘ) পুত্র - দ্বিজ / তনয় / মিত্র ।

ঙ) হাতি - মাতঙ্গ / মাতাল / মত্ত ।

২) নিচের শব্দগুলির তিনটি করে প্রতিশব্দ লেখো :

(5×1)

ক) বন্ধু খ) কন্যা গ) পদ্ম ঘ) বিদ্যুৎ ঙ) ঈশ্বর

WEEKLY TEST-IV

SUBJECT: BENGALI

FM - 10

১) শূন্যস্থান পূরণ করো :

ক) পাড়ার_____ছেলে মোরা ভাই_____,

(2×1)

একসাথে_____আর_____যাই ।

খ) আমাদের ছোট_____মায়ের_____,

(2×1)

_____দিয়ে_____দিয়ে বাঁচিয়েছে_____।

২) একটি বাক্যে উত্তর দাও :

(4×1)

ক) ছেলেরা একসাথে কোথায় যায় ?

খ) গ্রামের ঘরগুলি কেমন ?

গ) 'করে ঝিকিমিকি'- কী ঝিকিমিকি করে?

ঘ) কাকে সকলে ডরে ?

৩) শব্দার্থ লেখ :

(2×1)

ক) কিরণ খ) আত্মীয়

WEEKLY TEST-I

SUBJECT: HINDI

FM - 10

क) दिए गए प्रश्नों के उत्तर लिखें।

1 × 5 = 5

- 1) अमीना अपनी कोठरी में क्यों रो रही थी?
- 2) बकरी ने बच्चों के क्या नाम रखे?
- 3) बकरी बढ़ई के पास क्यों गई?
- 4) लेंचो के खेत कहाँ थे ?
- 5) एक ही पौधा किन्हें पालता है?

ख) निम्नलिखित शब्दों के वचन बदलो।

1 × 5 = 5

- 1) पौधा 2) ओला 3) बूँद 4) नदी 5) बच्चा

WEEKLY TEST-II

SUBJECT: HINDI

FM - 10

1) दिए गए प्रश्नों के उत्तर लिखें।

2 × 5 = 10

- क) बीज के अंतर में कौन सोया था ?
- ख) पौधा को किसने पास आकर जगाया ?
- ग) पारस को बचपन से ही किससे यात्रा करने का शौक था ?
- घ) अकबर बीरबल को क्यों पसंद करते थे ?
- ङ) पूरब से पश्चिम तक किसकी पर्वत-माला फैली है?

WEEKLY TEST-III

SUBJECT: HINDI

FM - 10

क) प्रश्नों के उत्तर लिखें।

1 × 5 = 5

- 1) कौन-सी सड़क 'राजपथ' कहलाती है ?
- 2) डॉ० कलाम का जन्म कब और कहाँ हुआ ?
- 3) भैया कैसे रसगुल्ले लाए थे ?
- 4) भैया के रसगुल्ले लाने पर मुन्नू क्या गा रहा था ?
- 5) पेड़ पर बैठकर बालक क्या बनता ?

ख) समान तुक वाले शब्द लिखो।

1 × 5 = 5

- 1) पेड़ 2) डाली 3) मज़ा 4) मींचे 5) मलाई

WEEKLY TEST-IV

SUBJECT: HINDI

FM - 10

1) दिए गए प्रश्नों के उत्तर लिखें।

1 × 5 = 5

- क) सोन चिरैया का घोंसला कितने दिन में तैयार हो गया ?
- ख) राजा महाबली का शासन काल कैसा था ?
- ग) संजना ने चूहे के बारे में क्या खास बात बताई ?

घ) पुष्प क्या करके भाग्य पर इठलाना नहीं चाहता ?

ङ) पुष्प वनमाली से क्या कह रहा है ?

2) दिए गए शब्दों के शब्दार्थ लिखें।

1 × 5 = 5

1) चाह 2) रोचक 3) वरदान 4) सज्जा 5) करीब

WEEKLY TEST-I

SUBJECT: EVS

FM - 10

ANSWER THE FOLLOWING QUESTIONS

1. What does the term chewing the cud mean? (2)
2. What is a food chain? (1)
3. Why should a house be airy and well lit? (2)
4. What are natural fibres? Give examples. (2)
5. What is the name of first layer of soil? (1)
6. How is soil formed? (2)

WEEKLY TEST-II

SUBJECT: EVS

FM - 10

1. Different solids melt at different temperatures, some high, some low. These are called their _____ . (1)
2. The water absorbs heat from air and changes into vapour. This process is called _____ . (1)
3. How is freezing different from melting? (2)
4. Which state of matter is water vapour? (1)
5. The Sun, the Moon and the clouds are living things or nonliving things? (1)
6. What is the importance of spacesuits? (2)
7. What do we mean by reproduction? (2)

WEEKLY TEST-III

SUBJECT: EVS

FM - 10

ANSWER THE FOLLOWING QUESTIONS

1. Plants breathe through tiny pores called _____ . (1)
2. A butterfly breathes through _____ . (1)
3. What are some properties of air? (2)
4. What is cuticle? (2)
5. How is a tap root different from a fibrous root? (2)
6. How do decomposers help plants? (2)

WEEKLY TEST-IV

SUBJECT: EVS

FM - 10

1. What is preening? (2)
2. What is molting? (2)
3. Which are the organs of the circulatory system? (2)
4. What are luminous and non-luminous objects? (2)
5. What are comets? (2)

UNIT TEST-I

SUBJECT: ENGLISH

FM - 20

1) Fill in the blanks:-

(1x5)=5

- a) The boats sail -----.
- b) Monday was bright and -----.
- c) Anna had a big family and a big house on a -----.
- d) All the little girls began to -----.
- e) Sentence is a group of -----.

2) Write T for true and F for false. -

(1x5)= 5

- A) The clouds sail across the sky.
- B) Manu went on a picnic on Saturday.
- C) Anna read books about the moonlight.
- D) A little girl fell off her chair.
- E) A proper noun always begins with a small letter.

2) Answer the following questions.

(2x5=10)

- a) Why does the poet compare the rainbow to a bridge?
- b) What did Manu forgot to do when it started raining?
- c) Why was Anna hugging everyone?
- d) Give two examples of Proper Nouns?
- e) Write the plural form of the following words.

i) ox ii) leaf

UNIT TEST-I

SUBJECT: BENGALI

FM - 20

বিভাগ - ক

১(সঠিক উত্তরটি খুঁজে নিয়ে লেখো :

৫x১=৫

ক) নেকড়ে বাঘ ঝড়ের সময় উঠেছিল)-নৌকার ওপরে / পাকুড় গাছে/ তাল গাছে।(

খ) রাজ্য ছেড়ে রামযুদ্ধ) -ে যাচ্ছেন ব/নবাসে যাচ্ছেন শ/িকারে যাচ্ছেন।(

গ) সিংহ আগের মত লফাতে পারেনা কারণ সে- (বুড়ো হয়ে গেছেত/ ার হাত ভেঙে গেছে / তার পা ভেঙে গেছে ।(

ঘ) গাধার মগজ টা কে খেয়েছিল- (শেয়াল/ হাতি / বাঘ)।

ঙ) কাঁচি বেদেনি লাফ দিয়ে বসলো - (হাতির পিঠে / কুমিরের পিঠে / বাঘের পিঠে)।

२) एकटि बाक्ये उतुर दाओ :

५×१=५

- क) नेकडे वाघेर जिभ केमन छिल?
ख) आबदुल माबि दादा के की एने दित ?
ग) 'तिनजन हइलेन पूरीर बाहिर' - तिनजन के के ?
घ) कके मन्त्री करार कथा शेयाल बलेछे?
ङ) गाधार चेहारा केमन छिल?

७) पूर्ण बाक्ये उतुर दाओ :

२

- क) जानकीर पिछने कारा केन चले येते चेसेछिल?

८) अर्थ लेखो :

७×१=७

- मूर्ख, डिङ्गि, महावीर

विभाग - ख

९) नीचेर प्रश्नटि उतुर दाओ :

- क) पद कय प्रकार ओ की की?

२

२) अब्यय पद थुंजे निये लेखो :

७×१=७

- क) तूमि तो भूषण चङ्गल ।

- ख) राम अथवा श्याम यावे ।

विशेषण पद थुंजे निये लेखो ।

- क) रामेर गाये लाल जामा।

UNIT TEST-I

SUBJECT: HINDI

FM - 20

क) दिए गए प्रश्नों के उत्तर में (✓) का निशान लगाइए।

1 × 5 = 5

- 1) फूलों से हमें क्या सीखना चाहिए ?
i) हँसना () ii) रोना () iii) झुकना ()
- 2) बालक का क्या नाम था ?
i) नरेंद्र () ii) सुरेंद्र () iii) महेंद्र ()
- 3) नुमाइश कहाँ लग रही है ?
i) स्कूल के पास () ii) बाज़ार के पास () iii) रेलवे स्टेशन के पास ()
- 4) नरेंद्र बड़े होकर क्या कहलाए ?
i) सत्यानंद () ii) विकानंद () iii) नित्यानंद ()
- 5) दीपक से हमें क्या सीख मिलती है ?
i) अधिरा हरना () ii) प्रेम बढ़ना () iii) शीश झुकाना ()

ख) उचित शब्द चुनकर रिक्त स्थानों की पूर्ति करें ।

1 × 5 = 5

- 1) फूलों से नति _____ सीखो। (हँसना / रोना)
2) _____ से सीखो, आगे जीवन- पथ पर बढ़ना। (वायु- प्रवाह/ जलधारा)
3) धुँएँ से सीखो हरदम ऊँचे ही पर _____ (चढ़ना / उतरना)
4) _____ की करिणों से सीखो, जगना और जगाना। (सूरज / धरती)
5) हदी की लिपि _____ है। (देवनागरी / रोमन)

ग) दिए गए शब्दों का सही मिलान कीजिए।

1 × 4 = 4

- | | |
|---------------|---------|
| 1) महाराष्ट्र | बँगला |
| 2) गुजरात | पंजाबी |
| 3) बंगाल | मराठी |
| 4)पंजाब | गुजराती |

घ) निम्नलिखित में से किन्हीं तीन प्रश्नों का उत्तर लिखें।

2 × 3 = 6

- 1) बच्चों की टोली कहाँ खेल रही थी?
- 2) अरुण कसिका भाई है?
- 3) हमारी राष्ट्रभाषा क्या है?
- 4) वर्ण कतिने प्रकार के होते हैं ?

UNIT TEST-I

SUBJECT: MATHEMATICS

FM - 20

1. Arrange the number in ascending order.

(1×2=2)

- a. 8375, 5387, 7385, 3758
- b. 3000, 2999, 6054, 7281

2. Arrange the numbers in descending order.

(1×2=2)

- a. 3810, 4861, 575, 8093
- b. 3456, 1000, 947, 25

3. Form the smallest and the largest 4-digit numbers using the given digits.

(2×2=4)

- i) 9, 4, 7, 2
- ii) 0, 1, 2, 3

4. Write the Roman numeral for the given Hindu Arabic numeral.

(1×2=2)

- i) 29
- ii) 37

5. Find the predecessor and the successor.

(2×2=4)

- i) 2220
- ii) 4000

6. Round of the numbers.

(1×2=2)

- i) 4126 (Nearest 10)
- ii) 6409 (Nearest 100)

7. Answer the following questions.

(2×2=4)

- i) Take any two digits even number and any 3-digit odd number. Add the two numbers. Is their sum an even number or odd number?
- ii) A number is 1205 greater than 2597. What is the number?

UNIT TEST-I

SUBJECT: EVS

FM - 20

A. FILL IN THE BLANKS

(1X5=5)

1. Birds such as hawks and owls also hunt with their _____ called _____.
2. Termites are insects that feed mostly on _____.
3. Two natural fibres are _____ and _____.
4. Things used to kill germs and insects are _____.
5. Layer of soil that is made up of a large solid mass of rock: _____.

B. WRITE TRUE OR FALSE

(1X5=5)

1. A food web is a network of many food chains. ()
2. Most herbivores chew the cud. ()
3. Silk is a natural fibre. ()
4. Fibres can be natural or human - made. ()
5. Clayey soil does not hold much water. ()

C. MATCH THE FOLLOWING

(1X5=5)

- | | |
|--------------------|--------------------------|
| 1. Sandy soil. | Natural fibres |
| 2. Chewing the cud | Cause diseases |
| 3. Frog | Does not hold much water |
| 4. Germs | Rumination |
| 5. Cotton and wool | Sticky tongue |

D. ONE LINER QUESTIONS

(1X5=5)

1. What is a food chain?
2. What do we mean by carnivorous animals?
3. What are fibres?
4. What is soil?
5. What is a predator?

UNIT TEST-I

SUBJECT: M.Sc.

FM - 20

A. Write the word meanings of the following words

(1x10=10)

1. Worth
2. Necessary
3. Treasure
4. Protect
5. Recognise
6. Admire
7. Nodded
8. Trail
9. Quiet
10. Pollution

B. ANSWER THE FOLLOWING QUESTIONS

(1X5=5)

1. What is cleanliness?
2. What was Chinki holding in her hand?
3. Who was looking at the sheet of paper?
4. Who is Raja?

5. Why we must be aware?

C.WRITE TRUE OR FALSE

(1x5=5)

1. Raja is Chinki's gardener's son. ()
2. Chinki showed her painting to Raja. ()
3. We should throw garbage on road. ()
4. We should grow more and more trees. ()
5. We should use a dustbin to throw garbage. ()

UNIT TEST-I

SUBJECT: GK

FM - 20

A. FIND THE ANSWERS FROM HELPDESK AND WRITE_

(1x10=10)


1. Plant with thick round white root that grows in water-
2. Plant that grows under water and has narrow leaves-
3. Species native to North America and Eurasia-
4. Also known as northern sea lion-
5. Largecat looks like a cheetah-
6. Largest lizard that is found on Indonesian Islands-
7. Bird that vomits anything just eaten-
8. Most poisonous bird in the world-
9. Smallest bird that can fly backwards-
10. Largest nocturnal primate in the world-

HELP DESK

Gray Wolf, Steller sea lion, Leopard, Komodo dragon, aye-aye, humming bird, black vulture, pitohui, water-chestnut, hydrilla

B. FIND AND WRITE THE NAMES OF THE FOLLOWING

(1X5=5)



C.MATCH THE FOLLOWING

(1x5=5)

- | | |
|-------------|---------------|
| A. Sugar | Cotton |
| B. Clothes | Neem |
| C. Lotus | Desert region |
| D. Cactus | Water |
| E. Medicine | Sugarcane |

UNIT TEST-I

SUBJECT: COMPUTER

FM - 20

A. Choose the correct answer.

(1×3=3)

1. Which of the following options is not displayed by the welcome screen?

(i) New (ii) Open (iii) Save

2. Which of the following is the main screen of the windows?

(i) Start (ii) Admin login (iii) Desktop

3. Which tool has an option for toggling the tool names on and off?

(i) Toolbar (ii) Name toggle (iii) Canvas

B. Fill in the blanks.

(1×3=3)

1. _____ tool displays line and curve options.

2. _____ is present in the right pane of start menu.

3. _____ is a part of Computer that we can touch and see.

C. Answer the following questions in one word.

(1×4=4)

1. Which is the latest version of Windows?

2. What is the full form of ALU?

3. What is the shortcut key to reverse your action, if you make a mistake while drawing?

4. Text tool is present on which bar?

D. Answer the following questions in one or two sentences.

(2×5=10)

1. What is a printer? Write the names of the different types of printers.

2. What is an icon?

3. Name any four components of paint 3D window.

4. What is Desktop Background?

5. What is the role of CPU?

UNIT TEST-I

SUBJECT: DRAWING

GRADE: A/B/C

Draw and colour any one picture from the following topics

1. Scenery

2. Lotus

3. A Flag

A. Choose the correct answer: -

(1×10=10)

- 1) What are prettier than boats and ships?
a) bridges b) roads c) clouds
- 2) Dipa loved to ----
a) sing b) jump c) dance
- 3) Dipa started her training when she was ----- years old.
a) nine b) eight c) five
- 4) Oscar Penguin loved to eat -----
a) carrots b) jelly beans c) bananas
- 5) Oscar had to do ----- things to solve his problem.
a) two b) three c) four
- 6) What becomes 'a nasty mass of slime'?
a) sugar b) rotten food c) fresh vegetables
- 7) Find out the proper noun of the following.
a) days b) Peter c) ocean
- 8) Choose the correct feminine form of 'stallion'.
a) cow b) mare c) doe
- 9) Select the correct spelling of the following.
a) manoeuvre b) manoevre c) manouvre
- 10) Fill with suitable articles.
a) ----- man walks slowly.
b) Can you run for 2 km in ----- hour ?

B. Write the meanings of the following words: -

(1×5=5)

- 1) gadgets. 2) acrobatics 3) springboard 4) mould 5) ancient

C. Write 'T' for true and 'F' for false:-

(1×4=4)

1. Ships sail on the rivers.
2. When it finally rained, Manu started dancing.
3. Agartala is the capital of Manipur.
4. Dipa won the bronze at the 2014 Glasgow Commonwealth Games.

D. Match the following columns:-**(1×6=6)**

COLUMN A	COLUMN B
1. Sugar	F) brave
2. Bird	G) new
3. Child	H) sticky
4. Shirt	I) sweet
5. Pin	J) happy
6. Soldiers	K) beautiful

E. Write the comparative and superlative degrees of the following words.**(1×5=5)**

- 1) Big 2) Short 3) Intelligent 4) Heavy 5) Bad

F. Answer the following questions (short type):-**(2×4=8)**

- 1) Why is gymnastics not an easy sport?
- 2) What did Oscar's mother tell him to do?
- 3) What is kept in the 'special place' in the refrigerator?
- 4) Write the definition of Proper noun.

G) Answer these questions (Long Type).**(3×4=12)**

- 1) Why was Dipa scared when she started her training?
- 2) 'I can do those three things.'
 - a) Who is the speaker?
 - b) What were the three things?
 - c) How was the problem solved?
- 3) What does the mother mean when she says , ' Apparently, it's time'?
- 4) Rewrite the phrases given below using the ('s) to show possession.
 - i) the book of Rohit
 - ii) the car of Mr Roy
 - iii) the tail of the cat

H) Write the opposites of the following words.**(2×2=4)**

- 1) Reluctant 2) ancient 3) start 4) Major

I. Write a small paragraph (six lines) on 'The Dog'.**(6)**

বিভাগ - ক

- ১) 'আমি ভয় করবো না' - কবিতাটি কবির নাম সহ প্রথম আট লাইন মুখস্থ লেখো। ৮
- ২) সঠিক উত্তরটি বেছে নিয়ে লেখো : ১২×১=১২
- ক) অমল ছিল - (নৌকায় / ফুলের বাগানে / ঘরে)।
- খ) সুধা সাজি ভরে ফুল তুলে এনে (মালা গাঁথে / ফেলে দেয় / খেলা করে)
- গ) অমল কাজ খুঁজতে যেতে চায় (পাহাড়ের নীচে/ ঝরনা পার হয়ে / দূর দেশে)।
- ঘ) ছুরি লুকিয়ে ছিল (ঘাসের মধ্যে / দেওয়ালে/ আগুনে)।
- ঙ) চোরকে ধরে চিৎকার করছিল (শিঙি মাছ / কুমির / বেল)।
- চ) পাল্লাবুড়ি গদ্যটির লেখক (রবীন্দ্রনাথ ঠাকুর / যোগীন্দ্রনাথ সরকার / গোপালচন্দ্র ভট্টচার্জ)।
- ছ) রাজ্য ছেড়ে রাম (যুদ্ধে যাচ্ছেন / শিকারে যাচ্ছেন / বনবাসে যাচ্ছেন)।
- জ) তরীখানা বাইতে গেলে (হাল ছেড়ে দিতে হয়/ তুফান আসে /ভয় পেতে হয়)।
- ঝ) পৃথিবীতে কবি থাকতে চান (ভয় পেয়ে / ভয় না পেয়ে / মাথা উঁচু করে)।
- ঞ) জাগিয়ে বাঘ মারা গল্পে লেখক কোথায় হরিণ চরতে দেখেছিল (পাহাড়ের উপরে / ঘরের পাশে / ডোবার ধরে)।
- ট) কাছারি বাড়িতে (হাতি ঢুকেছিল / বাঘ ঢুকেছিল / গরু ঢুকেছিল)।
- ঠ) যেদিন আমরা সুন্দরবন পৌঁছালাম সেদিন আবহাওয়া (ভালো ছিল / কেবল বাতাস আর বৃষ্টি / খুব শীত)।

৩) অর্থ লেখো : ৫×১=৫

জো , দাম , শিরে , তরী , ভবে ।

৪) পদ পরিবর্তন করো : ৫×১=৫

ভয়, ধর্ম, সময়, জল, কবিরাজ ।

৫) বর্ণ সাজিয়ে শব্দ তৈরী করো । ২×১=২

দি পা রু দি ল , ত ন তা পা ভা ।

৬) নীচের প্রশ্নগুলির উত্তর দাও । ৮×১=৮

ক) রাজবাড়ির একদম কাছে পথের ধরে কী পড়েছিল ?

খ) 'আমায় ঘাটে বেঁধে রাখো।' একথা কে বলেছিল ?

গ) কে অমলকে বাইরে যেতে বারণ করেছিল ?

ঘ) সুধা কার মেয়ে ছিল ?

ঙ) তরীখানা বাইতে গেলে কী হয় ?

চ) হাল ছেড়ে দিলে কী হয় ?

ছ) কাছারির কুকুর গুলো পালাচ্ছিল কেনো ?

জ) মহেশ সর্দার প্রথমে যে বাঘটা মেরেছিল তার দৈর্ঘ্য কত ছিল ?

৭) পূর্ণ বাক্যে উত্তর দাও : ২+২+১=৫

ক) কবি কীভাবে জীবন কাটাতে চেয়েছেন ? ' মাঝে মাঝে তুফান মেলে '- তুফান এলে কি করা উচিত ? মহেশ সর্দার ঘুমন্ত বাঘকে গুলি করেনি কেনো ?

- १) जन्मदिने बच्चुके आमन्त्रण जानिये पत्र लेखो : ५
- २) अतीत काल काके बले ? २
- ३) सठिक उतराटि बेछे नियो लेखो: ७×१=७
- क) आमि स्कुले गियोछिलाम । (भविष्य काल / अतीत काल) ।
- ख) सकाले सूर्य ओठे । (वर्तमान काल / भविष्य काल) ।
- ग) रवि बाजार यावे । (वर्तमान काल / भविष्य काल) ।
- ४) सठिक क्रिया पदटि बेछे नियो लेखो : ७×१=७
- क) गतकाल राम स्कुले (यावे /गियोछिल)।
- ख) मेघ करेछे ,बृष्टि (आसवे / एसेछिल)।
- ग) आमरा आगामीकाल शुशुनिया (गियोछिलाम /यावो)।
- ५) क्रियार काल निर्णय करो : २×१=२
- क)सूर्य पूर्व दिके ओठे ।
- ख) आमि बहैटि पडेछिलाम ।

HALF YEARLY EXAMINATION

SUBJECT: HINDI

FM - 60

खण्ड- क

क) सही उत्तर चुनकर (✓) का निशान लगाएँ ।

1 × 5 = 5

1) पानी कैसा बरसा ?

- i) चम- चम () ii) रिमझिम - रिमझिम ()

2) प्रिया नाम की लड़की किस गाँव में रहती थी ?

- i) सुंदर नगर () ii) जाम नगर

3) एक औरत ने किस रंग की ओढ़नी ओढ़ रखी थी ?

- i) पीला () ii) लाल ()

4) बाल- दिवस कब मनाया जाता है ?

- i) 14 नवंबर () 2) 5 सितंबर ()

5) लगातार टी० वी० देखते हुए परवेज़ को कितने घंटे हो गए थे ?

- i) चार () ii) सात ()

ख) समान तुक वाले शब्द लिखें। (कोई पाँच)

1 × 5 = 5

- 1) पानी 2) ताल 3) काला 4) महक 5) बरस 6)ओर

ग) निम्नलिखित वाक्यों में से संज्ञा शब्द छाँटकर लिखें।

1 × 5 = 5

1) प्रिया कक्षा तीन में पढ़ती थी।

2) एक दिन वह विद्यालय जा रही थी।

3) मैं नए- नए शहर देखकर आऊँगी।

4) एक औरत ने लाल ओढ़नी ओढ़ रखी थी।

5) सभी ने प्रिया की बहुत प्रशंसा की।

घ) दिए गए शब्दों के अर्थ लिखें कोई पाँच।

1 × 5 = 5

1) गरजना 2) घनघोर घटा 3) पुरस्कार 4) बहादुरी 5) प्रतिवर्ष 6) डकैत

इ) निम्नलिखित प्रश्नों के उत्तर दो। (कोई पाँच)

2 × 5 = 10

1) कविता में किस ऋतु के बारे में बताया गया है ?

2) प्रिया रोज़ स्कूल कैसे जाती थी ?

3) मम्मी ने परवेज़ से क्या कहा ?

4) बाल दिवस पर क्या घोषणा होती है ?

5) गार्ड बाबू के हाथ में क्या थी ?

6) प्रिया को उसकी समझदारी के लिए किसने पुरस्कार दिया ?

7) मेढक क्या कर रहे हैं ?

खण्ड- ख

क) दिए गए अशुद्ध शब्दों के शुद्ध रूप लिखें।

(कोई दस)

1 × 10 = 10

1) कवी 2) ग्यान 3) किरपा 4) छमा 5) अनील 6) आधीन 7) क्षात्र 8) ग्यानी 9) चहिए 10) जनम

11) रात्री

ख) दिए गए शब्दों के लिंग परिवर्तन करें।

(कोई पाँच)

1 × 5 = 5

1) मौसा 2) चाचा 3) बेटा 4) मोर 5) शेर 6) सेठ

ग) नीचे लिखे वाक्यों में से संज्ञा शब्द छाँटकर उसके सही संज्ञा भेद के नीचे लिखिए।

1 × 5 = 5

व्यक्तिवाचक, जातिवाचक, भाववाचक

1) राधा खिलौने से खेल रही है।

2) आम बहुत मीठा है।

3) पिता जी आगरा गए हैं।

4) छात्र पढ़ रहे हैं।

5) आज पाठशाला बंद है।

घ) सही मात्रा लगाकर शब्द दोबारा लिखिए।

(कोई पाँच)

1 × 5 = 5

1) कबतर 2) सतरा 3) थला 4) कताब 5) हथल 6) मठई

इ) शब्दों को सही क्रम में लिखकर वाक्य बनाइए।

1 × 5 = 5

1) है चिड़िया चहचहाती पर पेड़

2) खाता अंशुल है फल

3) खिले बाग फूल में है

4) लाए फल से बाज़ार पिता जी

5) झूला है झूलती नीरा

1. Subtract the numbers:-

$5 \times 2 = 10$

a. 854	b. 378	c. 700	d. 8279	e. 4853
$- 431$	$- 296$	$- 469$	$- 6158$	$- 2741$
<input type="text"/>	<input type="text"/>	<input type="text"/>	<input type="text"/>	<input type="text"/>

2. Fill in the blanks :-

$10 \times 1 = 10$

- a. $234 - 134 =$ _____
- b. $999 - 666 =$ _____
- c. $5 \times$ _____ $= 35$
- d. _____ $\times 12 = 60$
- e. $5316 - 1000 =$ _____
- f. $13 \times$ _____ $= 104$
- g. $8 \times 1000 =$ _____
- h. $19 \times 19 \times 19 \times 19 \times 0 =$ _____
- i. $32 \times 10 \times 1 =$ _____
- j. $106 -$ _____ $= 0$

3. Write the division facts for the multiplication facts:-

$3 \times 2 = 6$

- a. $9 \times 15 = 135$ _____
- b. $2 \times 14 = 28$ _____
- c. $8 \times 5 = 40$ _____

4. Write the numerator, denominator and the fraction.

$4 \times 1 = 4$

- a. Five – sixths - _____
- b. Eight-ninths - _____
- c. Two – fourths - _____
- d. One – seventh - _____


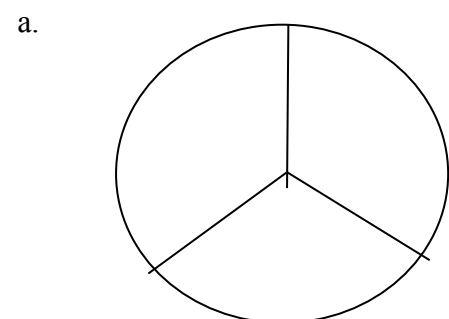
5. Compare and fill in the blanks using $>$, $<$ or $=$

$4 \times 1 = 4$

- a. $\frac{1}{8}$ $\frac{5}{8}$
- b. $\frac{3}{6}$ $\frac{1}{6}$
- c. $\frac{3}{5}$ $\frac{4}{5}$
- d. $\frac{1}{8}$ $\frac{1}{8}$

6. Colour or shade one –third of the shapes:-

$2 \times 2 = 4$



7. draw line segments of lengths:- $2 \times 2 = 4$

- a. 7 cm b. 8 cm

8. Draw a ray OR. Mark O and R. 2

9. Fill in the blanks:- $8 \times 1 = 8$

- a. A pencil box is an example of a _____.
- b. A solid shape with no vertex is a _____.
- c. A cube has _____ edges _____ vertices.
- d. A solid shape with three faces is a _____.
- e. A cylinder has _____ edges and _____ curved face.
- f. a. A square is bounded by _____ lines .

10. Solve the sums :- $2 \times 4 = 8$

- a. Jatin has 28 apples. He distributes them equally among seven children. How many apples does each child get?
- b. Manya eats 45 nuts everyday. How many nuts does she eat in 30 days?
- c. How many months are there in 10 years?
- d. Add 7456 and 679 and subtract 1387 from the sum.

HALF YEARLY EXAMINATION

SUBJECT: EVS

FM - 60

A.FILL IN THE BLANKS

(1X15=15)

1. A bunch of very fine and bushy roots is called as _____.
2. A leaf made up of separate leaflets attached by a petiole to the stem is called _____.
3. Openings on leaves which allows the passage of air is called _____
4. All living things need _____ to breathe.
5. In autumn,the _____ of some trees change colour.
6. A butterfly breathes through _____.
7. Things such as water,milk,oil have fixed _____ but no fixed _____.
8. _____ is anything that has mass and takes up space.
9. Onion and grass have _____ root.
10. Animals _____ by laying eggs or giving birth to their young ones.
11. Plants do not have _____ organs.
12. Plants and animals _____ upon each other for survival.
13. The shoot system grows _____ the ground.
14. A house should have proper _____ and enough open space to let in fresh _____.
15. Non living things do not perform any life _____.

B. WRITE TRUE OR FALSE**(1X10=10)**

1. Fish breathe through gills. ()
2. Herbivores eat flesh of other animals . ()
3. Stomata is the breathing organ of plants . ()
4. Solids have a fixed shape and volume . ()
5. Melting is a process in which solid turns to liquid on cooling .()
6. Air is a mixture of different gases. ()
7. Matter exists in four states.()
8. Vaporization is a process in which gas turns to liquid.()
9. Organisms that feed on dead plants and animals are called as herbivores.()
10. Flowers attract birds and insects for breathing.()

C.MATCH THE FOLLOWING**(1X5=5)**

- | | |
|----------------|------------------|
| 1. Plants | sticky |
| 2. Fish | excretion |
| 3. Chlorophyll | primary producer |
| 4. sweat | green leaves |
| 5. Clayey soil | gills |

D.ANSWER THE FOLLOWING QUESTIONS**(2X15=30)**

1. Write two human made fibres name.
2. What is a tap root?
3. What is transpiration??
4. What is matter?
5. What is freezing?
6. Why do living things need food?
7. What is the function of a seed?
8. Write two properties of liquid.
9. What are the basic parts of plants?
10. What are the three states of matter?
11. What are the functions of stem of a plant?
12. How do decomposers help plants?
13. What is reproduction?
14. How is freezing different from melting?
15. What is evaporation?

A.FIND THE ANSWERS FROM HELPDESK AND WRITE

(1x30=30)

1. It is one of our neighbouring country -
2. The busiest and biggest port located in Maharashtra -
3. Velavadar National Park is situated at-
4. The first president of independent India -
5. The largest river bridge of India -
6. Famous singer of Thumri -
7. The famous personality Shubha Mudgal sings -
8. Second largest continent in the world -
9. Smallest continent in the world -
10. Deepest point of Earth -
11. Ocean also known as Sea of Atlas -
12. Ocean connected to the Mediterranean Sea by Suez Canal -
13. Longest river in the world -
14. Amazon river originates from -
15. She is known as 'Maiden Queen'-
16. The Parliament of France is known as-
17. Port of Odisha, exports raw iron to japan-
18. The largest national park in India -
19. Large cat looks like cheetah -
20. Largest nocturnal primate in the world -
21. Most poisonous bird in the world -
22. Kaziranga National Park is situated at-
23. Parliament of Japan is known as -
24. Periyar National Park is situated at-
25. Neighbouring country in east of India-
26. Largest lizard found on Indonesian island -
27. She is known as the 'lady with the lamp'-
28. It is the fifth largest continent in the world -
29. The largest delta in India -
30. Clothes we get from -

HELP DESK

Dr.Bhupen Hazarika Bridge-Assam, Mumbai port , Sundarban,Gujarat, Africa, Thumri music, Australia, Poornima Chaudhary, Queen Elizabeth-I , The Indian Ocean, Dr.Rajendra Prasad ,The Mariana Trench, Pakistan,The Atlantic Ocean, Nile,Andes-Peru, National Assembly,Paradip port, Leopard,aye-aye,Pitohui,Assam ,Diet,Kerala, ,Duma and federal council ,Bangladesh,Komodo dragon ,Port Blair, Karnataka, Rabindranath Tagore,Baikal mountains, Florence Nightingale , Antarctica,cotton plant

B.MATCH THE FOLLOWING

(1x5=5)

- | | |
|-----------------|--------------------|
| A.Sugar | a.South of India |
| B.Srilanka | b.Hindustani music |
| C.Port of Goa | c.Sundarban |
| D.Largest delta | d.Marmugao port |
| E.Rita Ganguly | e.Sugarcane |

E.COMplete the following word puzzle with the names of water bodies

(1x5=5)

1. O _____ N
2. R _____ R
3. L _____ E
4. P _____ D
5. S _____ A

F. Name any five neighbouring countries of India.

(1x5=5)

G. Write the names of seven continents.

(1x7=7)

H. Write the names of five oceans.

(1x5=5)

I. NAME THE FOLLOWING

(1x3=3)

1. India has _____ major ports.
2. Steller sea lion is also known as _____ sea lion.
3. _____ is known as 'The Fuhrer'.

HALF YEARLY EXAMINATION

SUBJECT: M.SC.

FM - 60

A.WRITE THE WORD MEANINGS OF THE FOLLOWING WORDS

(1x10=10)

1. Scratching
2. Unique
3. Courageous
4. Reap
5. Achieve
6. Vain
7. Give up
8. Disappointed
9. Determination
10. Raised

B.ANSWER THE FOLLOWING QUESTIONS

(2X10=20)

1. Who was jealous of King Bruce?
2. What was Chinki holding in her hand?
3. How many attempts did king Bruce make?
4. Who is Raja?
5. What were the names of kamali's friends?
6. Who planted grains at last?
7. What is cleanliness?
8. In which pose of yoga we have to sit in heel sitting pose?
9. Who was a famous king of Scotland in Europe?
10. King Bruce was inspired from whom?

C.WRITE TRUE OR FALSE**(1x5=05)**

1. Raja is Chinki's gardener's son. ()
2. Kamali's friends were hardworking. ()
3. Yoga builds our concentration power. ()
4. Spider reached its web on tenth attempt ()
5. We should learn working hard from our childhood. ()

C.MATCH THE FOLLOWING**(1x5=5)**

- | | |
|---------------------|------------------|
| 1. Efforts reap | a. Practice Yoga |
| 2. Red hen | b. Fun |
| 3. King of Scotland | c. Best result |
| 4. Yoga is | d. King Bruce |
| 5. To build stamina | e. Kamali |

C.REARRANGE THE WORDS AND WRITE**(1x5=5)**

1. LOUCOR
2. LOWFRE
3. THARE
4. HNIKIC
5. AMAKIL

D.FILL IN THE BLANKS**(1x5=5)**

1. Kamali found some _____ of wheat.
2. _____ was a famous king of Scotland in Europe.
3. Never underestimate _____.
4. Kamali had three friends a duck, a dog and _____.
5. Hard work means doing one's _____.

E.ANSWER THE FOLLOWING QUESTIONS**(2x5=10)**

1. Write five benefits of yoga.
2. Write the goal you are determined to accomplish.

A. Choose the correct option:

1×5=5

1. Where can you find the bullets and numbering buttons?
(a) Border Tab (b) Paragraph group (c) Font group
2. Which option is selected from the file tab to open a save document?
(a) Exit (b) Close (c) Open
3. Text tool is present on which bar?
(a) Menu (b) Tool (c) Title
4. On which side of the taskbar is Notification Area present?
(a) Right (b) Left (c) Bottom
5. Which is latest version of windows?
(a) Windows 8.1 (b) Windows 10 (c) Windows 11

B. Fill in the blanks:

1×6=6

1. Text effects are available in the _____ group.
2. In Word, we create documents by _____ them.
3. _____ displays the available colour options.
4. To select a single word, you will quickly _____ on the word.
5. _____ allows you quickly move within your open windows.
6. _____ option displays two sliders for the thickness and opacity.

C. Answer the following question:

2×5=10

1. What do you mean by formatting the text?
2. What is a Ribbon?
3. Name any three components of paint 3D window.
4. What is an Icon?
5. What is a bullet?

D. Answer the following question.

3×3=9

1. Write the steps to apply an artistic border.
2. Write down the steps to create a document in word 2016.
3. Write steps to add 2D text.

Q.1 Draw any one picture of given topics and colour it.

A) CAR

B) DESIGN

C) FLOWER

UNIT TEST-II

SUBJECT: ENGLISH

FM - 20

A) Fill in the blanks:-

(1x5)=5

- 1) The villagers gathered near the big field for a -----.
- 2) One day the child lost a -----.
- 3) Alexander desired to -----.
- 4) The word 'nuisance' means -----.
- 5) The word 'pity' means -----.

B) Write T for true and F for false.-

(1x5)= 5

- 6) Owls have become a big nuisance for the whole village.
- 7) The child in the poem 'My Little Doll ' played in the heath one day.
- 8) The name of Alexander's horse was Chetak.
- 9) A pronoun is a word that is used in the place of a verb.
- 10) Past tense of 'eat' is 'ate'.

C) Answer the following questions.

(2x5=10)

- 11) How did the two young men find Uncle Owl?
- 12) How does the child describe its doll in the beginning?
- 13) Why did Alexander feel sorry for the saints?
- 14) Make sentences with the following verbs
 - i) run
 - ii) read
- 15) Write the past tense of the following words
 - i) grow
 - ii) sleep

UNIT TEST-II

SUBJECT: BENGALI

FM - 20

১. "আমরা ঘাসের ছোট ছোট ফুল" কবিতাটি প্রথম স্তবক কবির নাম সহ মুখস্থ লেখ।

৫

২. সঠিক উত্তরটি খুঁজে নিয়ে লেখো:-

৪

ক) করিম চাচা পেশায় ছিলেন-

১. দর্জি
২. নাপিত
৩. ব্যবসায়ী

খ) করিম চাচা শপথ করেছিলেন-

১. পুলিশের কাছে
২. ফকিরের কাছে
৩. পাড়ার লোকের কাছে

গ) "মিথ্যার পাহাড়" গল্পটি হলো একটি উপকথা। উপকথাটি -

১. কান্দীরি
২. গুজরাতি
৩. নেপালি

ঘ) ঘাসফুল দোলে-

১. বর্ষায়
২. শান্ত বাতাসে
৩. কিরণে

ক) কিরণে খ) ওস্তাদ

8. প্রশ্নের উত্তর লেখ

(৬×১=৬)

ক) ঘাসের পাতা কেমন?

খ) করিম চাচার সেলাইয়ের হাত কেমন ছিল?

গ) দুলে দুলে ঘাসফুল কী করে?

ঘ) হরিণের কোথায় গুলি লেগেছিল?

ঙ) গল্পে লেখক তার বাবার সাথে কোথায় গিয়েছিলেন?

চ) গাধার পিঠে কী ছিল?

৫. প্রতিশব্দ লেখো:- (দুটি করে)

৩

ক) নদী খ) গৃহ গ) শিক্ষক

UNIT TEST-II

SUBJECT: HINDI

FM - 20

1) सही उत्तर चुनकर (✓) का निशान लगाओ।

1 × 5 = 5

क) अध्यापिका जी का क्या नाम था ?

i) संजना () ii) अर्चना () iii) वंदना ()

ख) राजा ने बिना देर किए क्या लगाया ?

i) बाज़ार () ii) दरबार () iii) पंडाल ()

ग) तेनालीराम किसके दरबारी थे ?

i) राजा कृष्णदेव राय () ii) राजा पुष्पदेव राय () iii) राजा रामदेव राय ()

घ) किसकी पुस्तक खोई थी ?

i) पार्थ () ii) निधि () iii) रिया ()

ङ) राजकुमारी क्यों उदास थी ?

i) तारों के लिए () ii) सूरज के लिए () iii) चाँद के लिए ()

2) नीचे दी गई पंक्तियाँ पढ़कर (✓) या (×) का चिह्न लगाओ।

1 × 5 = 5

क) अध्यापिका जी ने बच्चों को जादू का खेल दिखाया। ()

ख) अध्यापिका जी के हाथ में पेन था। ()

ग) सब बच्चों ने मिलकर चोरी की थी। ()

घ) राजकुमारी को चाँद चाहिए था। ()

ङ) बच्चों ने खिलौने पाकर अध्यापिका जी को धन्यवाद दिया। ()

3) दिए गए शब्दों का वचन बदलें।

1 × 5 = 5

क) तोता ख) लड़का ग) घोड़ा घ) बच्चा इ) पुस्तक

4) निम्नलिखित वाक्यों में उचित सर्वनाम भरिए।

1 × 5 = 5

क) _____ रमेश का भाई है। (इन्हें / यह)

ख) दाल में _____ काला है। (कुछ / बहुत)

ग) _____ कल गाँव जा रहा हूँ। (मैं / कौन)

घ) बाहर _____ आया है ? (क्या / कौन)

इ) _____ पत्र बाँटता है। (वह / मैं)

UNIT TEST-II

SUBJECT: MATHEMATICS

FM - 20

1. Convert:-

(1×2=2)

a. 500 cm to m

b. 5 km to m

2. Arrange in columns and add:-

(1×2=2)

a. 7 km 235 m + 3 km 375 m + 1 km 965 m

b. 61 m 27 cm + 23 m 15 cm

3. Divide

(1×2=2)

i) 64 km 656 m ÷ 4

ii) 615 m 95 cm ÷ 5

4. Multiply.

(1×2=2)

i) 7 kg 675 g by 9

ii) 35 kg 983 g by 4

5. Convert into litres and millilitres

(1×3=3)

i) 1973 ml

ii) 5000ml

iii) 4785 ml

6. Write the amount in words

(1×3=3)

i) Rs. 17.50

ii) Rs. 132.55

iii) Rs. 12.05

7. Solve the sums.

(2×3=6)

i) Neha's stall sold 45 m 75 cm lace. She had 57 m 97 cm lace in the beginning. How much lace is left with her?

ii) A train has 26 carriages. Each carriage is 30 m long. How long will the train be?

iii) Sugar costs Rs.51.50 per kg, wheat flour Rs. 215.50 per bag and tea Rs. 80.50 a packet. What is the total cost of the three items?

A.FILL IN THE BLANKS**(1x5=5)**

1. _____ of a thing tells us how long or short it is.
2. A _____ is used to measure capacity.
3. The nervous system is made of the brain, spinal cord and _____.
4. Body's delivery system: _____.
5. Another name for tail and wing feathers: _____.

B.WRITE TRUE OR FALSE**(1x5=5)**

6. Temperature is measured by thermometer. ()
7. 10 years means one decade. ()
8. Nose and lungs are parts of circulatory system. ()
9. An adult human skeleton has about 206 separate bones. ()
10. Birds pick up and crush food with their legs. ()

C.MATCH THE FOLLOWING**(1x5=5)**

- | | |
|---------------------|-----------------------|
| 11. Skeletal system | a. scratching bird |
| 12. Capacity unit | b. length |
| 13. Metre | c. litre |
| 14. Eagle | d. framework of bones |
| 15. Hen | e. flesh eating birds |

D.ONE LINER QUESTIONS**(1x5=5)**

16. How are beaks useful to a bird?
17. Which feathers of birds are soft and fluffy that help birds to keep the body warm?
18. What are organs?
19. What are cells?
20. What is meant by length?

A. ANSWER THE FOLLOWING QUESTIONS

(1X15=15)

1. Which is the highest mountain peak in the world?
2. Dhaulagiri is located at-_____
3. Aconcagua is located at-_____.
4. The Canadian National Tower was built in which year?
5. Which blood group is called universal donor blood group?
6. Who is the author of Jungle Book?
7. Who is the author of Alice in Wonderland?
8. What is the name of master gland of human body?
9. What is the word for one who eats no meet?
10. What is the name of a place where birds, animals etc are kept?
11. The original handwritten or typed copy of a book, article etc is also known as - _____
12. Which symbols indicate the principles, values and events of the religion?
13. Which is the most abundant gas in the Earth's atmosphere?
14. Which gas is found in a bottle of cold drink?
15. Who is the only woman who win two noble prizes?

B.MATCH THE FOLLOWING

(1x5=5)

- | | |
|-----------------------------|------------------|
| 16. Noble prize in physics | a. nitrous oxide |
| 17. Gas to fill in balloons | b. pupil |
| 18. Air sacs in lungs | c. helium |
| 19. Black disc in the eye | d. C.V.Raman |
| 20. Laughing gas | e. alveoli |

A. WRITE THE WORD MEANINGS OF THE FOLLOWING WORDS

(1x5=5)

1. Contentment-
2. Worried -
3. Joyful-
4. Gesture-
5. Humble-

B. ANSWER THE FOLLOWING QUESTIONS

(2X5=10)

6. What kind of man Bhola was?
7. To whom did Bhola sell the shoes he made?
8. What kind of person was King Hari Singh?
9. Why the king and the other courtiers laughed?
10. Why was Dhaniram worried?

C. WRITE TRUE OR FALSE

(1x5=5)

11. Bhola was a rich person. ()
12. Lala Dhaniram was a cobbler.()
13. King Hari had a clever jester in his court. ()
14. Vrikshasana helps to keep the back straight.()
15. We should be satisfied with what we have .()

UNIT TEST-II

SUBJECT: COMPUTER

FM - 20

1. Choose the correct option.

(1×3=3)

- a. The pages on internet are called _____.
i) Web browser ii) Website iii) Webpage
- b. What is the process of completing one step and going on to the other is known as?
i) Stepwise thinking ii) Problem solving iii) Looping
- c. _____ is the process of finding solutions to a difficult task.
i) Problem solving ii) Critical thinking iii) Packing

2. Write T for true and F for false.

(1×3=3)

- a. You can buy or sell on internet. []
- b. You cannot solve a problem in steps. []
- c. Internet is the smallest network in the world. []

3. Fill in the blanks.

(1×4=4)

- a. _____ is the address of a website.
- b. _____ are used to open websites.
- c. you should stop at _____ light.
- d. _____ is a collection of web pages.

4. Answer the following questions.

(2×5=10)

- a. Write any two disadvantages of internet.
- b. What is a loop?
- c. What is URL?
- d. What is internet?
- e. What is step wise thinking?

UNIT TEST-II

SUBJECT: DRAWING

GRADE: A/B/C

Q.1 Draw any one picture of given topics and colour it.

A) FISH

B) WATCH

A. Choose the correct answer: -**(1×10=10)**

- 1) Who were sitting on the branches of the Banyan tree?
a) Crows b) people c) owls
- 2) What did the child lose one day?
a) a toy b) a cat c) a doll
- 3) Which Indian king did Alexander meet when he reached India?
a) King Shivaji b) King Ashoka c) King Puru
- 4) What was the name of Alexander's horse?
a) Bucephalus b) Chetak c) Wichahpi
- 5) The dragon is -----
a) happy b) sad c) angry
- 6) The mouse lived -----
a) inside the cupboard b) inside the dustbin c) under the sink
- 7) The word ' prudent ' means -----
a) wise b) fool c) angry
- 8) What did Goldilocks see in the forest?
a) a cottage b) a building c) a temple
- 9) In whose bed did Goldilocks sleep?
a) Daddy Bear's b) Baby Bear's c) Mamma Bear's
- 10) Opposite word of ' full ' is ----- a) short b) empty c) new

B. Write the meanings of the following words:-**(1×5=5)**

- 11) Conquer 12) Fierce 13) Scowled 14) Wrath 15) Besieged

C. Write 'T' for true and 'F' for false:-**(1×4=4)**

16. Alexander the Great had won many battles.
17. The dragon likes cats.
18. Mrs Melody lived with her mother.
19. Goldilocks was feeling tired and hungry.

Q. NO . 20. Match the pronoun with the word :-**(1×6=6)**

COLUMN A	COLUMN B
3. Amit	L) She
4. Priya	M) Mine
3. Uncle and Dad	N) He
4. Table	O) We
5. Indu and I	P) It
6. This book is	Q) They

Q. No. (21) A) Write the past tense of the following words.**(1×5=5)**

- a) Take b) Grow c) Sleep d) Run e) Eat

D. Answer the following questions (short type):-**(2×4=8)**

- 22) What do people think about dragons?
- 23) Underline the prepositions in the following sentences.
 - a) He is sitting beside the tree.
 - b) She came from Delhi.

24) Change the following sentences into the present continuous tense

- a) I wrote a letter
- b) The stars twinkle.

25) Fill in the blanks with correct modal given in the bracket.

- a) You (may/might) ----- leave now if you wish.
- b) (May/Can) ----- you play the piano?

E. Answer these questions (Long Type).

(3×4=12)

26) Describe the doll when the child found it later.

27) Write a few lines to describe the mouse in the story 'House - Mouse'.

28) What did Goldilocks do when she saw the three bears?

29) 'Yummmm!! That was just right. Oh look, three chairs. I think I'll sit down for a moment.'

- a) Who is the speaker?
- b) Who is being spoken to?
- c) What does 'that' refer to?

Q.NO. (30) Join the following sentences using suitable conjunctions.

(1×4=4)

- a) Rima opened her book . She began to read .
- b) Mr Husain is tall. Mr Khan is short.
- c) Ram is sad. He is late to school.
- d) You must hurry. You will miss the train.

Q. NO. (31) Write a small paragraph (six lines) on 'Saraswati Puja '.

(6)

ANNUAL EXAMINATION, 2023-24

SUBJECT: BENGALI

FM - 60

১) "আমাদের গ্রাম" কবিতাটি কবির নাম সহ আট লাইন মুখস্থ লেখ।

(৮×১= ৮)

২) সঠিক উত্তরটি খুঁজে নিয়ে লেখ :

(১২×১=১২)

২.১ মাইলস্টোন একটি - ক>বাংলা শব্দ খ>সংস্কৃত শব্দ গ>ইংরেজি শব্দ।

২.২ মনবেড় চটিতে ছিল - ক>প্রথম মাইলস্টোন খ>পঞ্চম মাইলস্টোন গ>দশম মাইলস্টোন।

২.৩ এক মাইল মানে প্রায় - ক>এক ক্রোশ খ>আধ ক্রোশ গ>দুই ক্রোশ।

২.৪ করিম চাচাপেশায় ছিল - ক>দর্জি খ>নাপিত গ>ব্যবসায়ী।

২.৫ গল্পটি একটি উপকথা। উপকথাটি - ক>গুজরাটি খ>কাশ্মীরি গ>নেপালি।

২.৬ করিম চাচা বড় - ক>মিথ্যে কথা বলত খ> সত্যি কথা বলত গ>কিছু কথা বলত না।

২.৭ আমরা ঘাসের ছোটো ছোটো - ক> পাতা খ>ফুল গ>ফল।

২.৮ ঘাসফুল দোলে - ক>শান্ত বাতাসে খ>বর্ষায় গ>কিরণে।

২.৯ গ্রামটি আয়তনে - ক>বেশ বড় খ>ছোটো গ>মাকারি ধরনের।

২.১০ আমাদের ছোটো গ্রাম মায়ের - ক>মতন খ>সমান গ>তুল্য।

২.১১ ক>নাদু মামা খ>রবি মামা গ>কানু মামা খুব ঘুরতেন।

২.১২ লোকটির - ক> ডান পায়ে খ>ডান চোখের কোণে গ> ডান হাতে আঁচল ছিল।

- ३) निचेर शब्दगुलिर अर्थ लेख : (५×१)
शान्त , मिलेमिशे , प्रतिष्ठा , प्रस्तर , तन्द्रा
- ४) निचेर शब्दगुलिर विपरीत शब्द लेख : (५×१)
आरम्भ , अपमानित, आकाश , ग्राम , जेगे
- ५) पद परिवर्तन कर : (५×१)
फूल , मन , सूर्य , चालाकि , निकट
- ६) दु-एकटि बाक्ये उत्तर दाओ :
क> "माइलस्टोन" की? माइलस्टोन देखते केमन ? [१+१]
ख> "मनेर दुःखे एकदिन करिम चाचा बलल"- से की बलल ? [२]
ग> कार साथे घासफुलेरा हेसे ओठे ? फुलेरा की करते वारण करेछे ? [१+१]
घ> छेलेरा एकसाथे कोथाय यय ? की बिकिमिकि करे ? [१+१]
ङ> नादु मामा की बले अहंकार करतेन ? [२]
च> 'शेखाते पारि एक शर्ते।' के, की शेखाते पारे ? शर्तटि की ? [२+१]
छ> पञ्चम माइल-स्टोन के अश्वरचन्द्र भूल मने करेछिलेन केन ? [२]
- ९) निचेर शब्दगुलिर दुटि करे समार्थक शब्द लेख : (५×१)
बाबा, पाथि, हात, दुर्गा, रात्रि
- ७) अर्थेर पार्थक्य लेख : (५×१)
अन्य पानि नित्य कमल शीत
अन्न , पानि , नृत्य , कोमल , सित।

ANNUAL EXAMINATION, 2023-24

SUBJECT: HINDI

FM - 60

खण्ड- क

1. सही उत्तर चुनकर (✓) सही का निशान लगाओ। (1 × 5 = 5)
- क) युनान के सिपाही कैसे थे ?
i) लालची () ii) बहादुर () iii) कायर ()
- ख) यूलिसिस ने पॉलीफ्रीमिस को क्या पीने को दिया ?
i) शरबत () ii) चाय () iii) कॉफ़ी ()
- ग) बिजली जाने पर बच्चे क्या खेल रहे थे ?
i) घोड़ा () ii) छुपम- छुपाई () iii) खो- खो ()
- घ) राघव को चुप रहने का संकेत किसने किया ?
i) रिया ने () ii) पंकज ने () iii) चिंकी ने ()
- ङ) घर में चार बरतन हैं, आज तो खाने- पीने का सामान भी नहीं है।
i) मछुआरे ने () ii) रानी मछली ने () iii) मछुआरिन ने ()
2. दिए गए शब्दों के अर्थ लिखें। (1 × 5 = 5)
- क) संग ख) गगन ग) बेहाल घ) भयानक ङ) दोस्ती

3. दिए गए पंक्ति में बताओ किसने-कहा , किससे- कहा ?

(1 × 5 = 5)

- क) रुको- रुको! हम तुमसे बात करना चाहते हैं।
ख) हम आपसे दोस्ती करने के लिए तैयार हैं।
ग) कुछ खाओगे ?
घ) हमें कभी भी कोई न डाँटे।
ङ) कब तक सोती रहोगी ?

4. दिए गए प्रश्नों में हाँ या नहीं में उत्तर दे।

(1 × 5 = 5)

- क) यूलिसिस एक राजा था।
ख) विशालकाय राक्षसों को ' साइक्लाॅप्स' कहते थे।
ग) 'साइक्लाॅप्स' के माथे के बीचों- बीच एक आँख थी।
घ) पॉलीफ़ीमिस एक महान संत था।
ङ) यूलिसिस ने अपना नाम 'कोईनहीं' बताया।

5. निम्नलिखित प्रश्नों में से किसी पाँच का उत्तर दो।

(2 × 5 = 10)

- क) बच्चे पूरा दिन क्या करते थे ?
ख) पानी में गिरते ही सुनहरी मछली में क्या परिवर्तन आया ?
ग) चाँद अपनी यात्रा कैसे करता है ?
घ) सुंदर नृत्य कौन दिखाती थीं ?
ङ) यूलिसिस और उसके साथी घूमते - घूमते कहाँ पहुँचे ?
च) बच्चों ने क्या देखा ?

खण्ड- ख

व्याकरण

1. दिए गए शब्दों में से किसी पाँच का पर्यायवाची शब्द लिखें।

(1 × 5 = 5)

क) चाँद ख) सूर्य ग) फूल घ) पेड़ ङ) आग च) कमल

2. दिए गए शब्दों में से किसी दस का विलोम शब्द लिखें।

(1 × 10 = 10)

क) अंदर ख) ऊँचा ग) बड़ा घ) दिन ङ) मोटा च) अपना छ) ऊपर
ज) अधिक झ) भला ज) एक ट) सरदी

3. अनेक शब्दों के लिए एक शब्द लिखें। (कोई पाँच)

(1 × 5 = 5)

क) जो खेती करता है ख) कक्षा में पढ़ाने वाला ग) जो चित्र बनाता है घ) जो डरता हो
ङ) जो कपड़े साफ़ करता है च) जो फल खाता हो

4. रिक्त स्थानों में सही शब्द भरिए।

(1 × 5 = 5)

क) माँ ने _____ से गहने बनवाए। (लुहार / सुनार)
ख) नीम के फल को _____ कहते हैं। (जामुन/ निबौरी)
ग) अपने देश की वस्तुओं को _____ कहते हैं। (स्वदेशी / विदेशी)
घ) जो डरता हो _____ (निडर / डरपोक)

इ) शेर _____ पशु है।

(शाकाहारी / मांसाहारी)

5. मुहावरे लिखें।

(कोई पाँच)

(1 × 5 = 5)

क) अक्ल का दुश्मन

ख) आग बबूला होना

ग) उल्लू बनाना

घ) अँगूठा दिखाना

इ) आसमान सिर पर उठाना

च) हाथ बँटाना

ANNUAL EXAMINATION, 2023-24

SUBJECT: MATHEMATICS

FM - 60

1. Convert:-

5 x 2 = 10

a. 5 km to m

b. 6 m 85 cm to m

c. 9 kg into grams

d. 21L 632 ml into mL

e. 1000 p into rupees

2. Add:-

4x2=8

a. . 642 cm +247 cm

b. 75 kg 864 g+365 kg 720 g

c. 13L 345 mL+3 L 125 mL+975 mL

d. Rs.538.50+Rs.245.50

3. Subtract:-

2x 2 =4

a. Rs. 849.45-Rs. 345.85

b. 6L 543 mL-3 L 852 mL

4. Arrange in columns and multiply:-

3x 2 =6

a. Rs. 35.85 x 7

b.. Rs.738.15 x 2

c. Rs. 56 x 8

5. Divide:-

2 x 2 = 4

a. Rs.54.81 ÷ 9

b. . Rs. 275.55 ÷ 5

6. Solve the sums:-

3 x 3 =9

a. Neha made 9 cakes and sold them at Rs. 500 each. What is the total amount of money she earned?

b. Reema bought 5 pens for Rs.750.75 .How much does one pen cost?

c. How many days are there in the first three months of a leap year?

7. Fill in the third column:-

5

FLOWERS	NUMBER	TALLY MARKS
Rose	10	
Marigold	11	
Dahlia	3	
Hollyhock	8	
Petunia	14	

8. Complete the series:-

2x2=4

- a. 7, 14, 21, 28, _____, _____, _____, _____
b. Aa, Bb, Cc, _____, _____, _____, _____


9. Fill in the blanks:-

6 x 1 = 6


- a. The hour hand of the clock is the _____ hand.
b. A quarter of an hour has _____ minutes.
c. 1 Fortnight = _____ days
d. The minute hand goes around the clock face _____ times in one day.
e. Half an hour has _____ minutes.
f. A leap year has _____ days.

10. Draw the hour and minute hands:-

2 x 2 = 4



2:30



10:15

ANNUAL EXAMINATION, 2023-24

SUBJECT: SCIENCE

FM - 60

A.FILL IN THE BLANKS

(1x10=10)

1. The only planet that has life on it is the _____.
2. A _____ is a group of stars.
3. Loud and unpleasant sounds are called _____.
4. Joining of two bones are called _____.
5. Another name for tail and wing feathers: _____.
6. _____ use their hard and strong beaks to drill holes into tree trunks to build their nest.
7. A group of organs that work together form an _____.
8. Unbalanced forces _____ the way something is moving.
9. _____ are special vehicles that have the speed and strength to escape the Earth's pull and travel into space.
10. A spacecraft is put into space with the help of _____.

B. WRITE TRUE OR FALSE**(1x10=10)**

1. Weight of an object can be measured with the help of a measuring scale. ()
2. Capacity is the amount of liquid that a vessel can hold. ()
3. Comets are big pieces of rock in solar system. ()
4. All the muscles together form muscular system. ()
5. Water exists in four states. ()
6. An astronaut is a special vehicle that can travel to space. ()
7. Non- luminous objects give out or emit light. ()
8. Moving air is called vapour. ()
9. Ozone layer blocks Sun's UV rays. ()
10. Day and night are caused due to rotation of Earth. ()

C. MATCH THE FOLLOWING**(1x10=10)**

- | | |
|-----------------|-------------------|
| 1. Cubit | a. Salty |
| 2. Sound | b. length |
| 3. Brain | c. Curved beak |
| 4. Parrot | d. Nervous system |
| 5. Ocean water | e. energy |
| 6. Sun | f. Space |
| 7. Astronaut | g. Star |
| 8. Rain | h. Talons |
| 9. Respiration. | i. Clouds |
| 10. Raptors | j. Vibration |

D. ANSWER THE FOLLOWING QUESTIONS**(2x15=30)**

1. What is preening of feathers?
2. Write two properties of water.
3. What are comets?
4. What are spacecrafts?
5. What are some properties of air?
6. What is water cycle?
7. How is an asteroid different from planets?
8. What are luminous objects? Give example.
9. What are some non-standard units of length?
10. Name the organs of circulatory system.

11. How does excretory system works?
12. Why do birds need nests?
13. What is a spacesuit?
14. What is atmosphere?
15. How does light help us?

ANNUAL EXAMINATION, 2023-24

SUBJECT: GK

FM - 60

A. ANSWER THE FOLLOWING QUESTIONS

(1 X 25=25)

1. Which device helps in listening to sound produced within the body?
2. Which instrument is used to measure blood pressure?
3. Gurla Mandhata is located at-_____.
4. Which machine helps doctors to study internal organs of the body?
5. The computer was invented by whom?
6. The wicket in cricket is made of how many many stumps?
7. Name the mountain peak located at Argentina.
8. What is the height of The Canadian National Tower?
9. Who wrote fables like 'The Tortoise and the Hare'?
10. Who is the author of the book 'Robinson Crusoe'?
11. Name the book written by Rudyard Kipling.
12. Godan is the written by whom?
13. What is the word for a man who lacks courage?
14. What is the word of a place for washing hands and face?
15. What is the word for a person who sells medicines?
16. What is the name gas which we obtain in a biogas plant?
17. Which is the most abundant gas in the Earth's atmosphere?
18. What are the two gases that make up water?
19. Which gas is used as fuel in kitchen?
20. Which organ is considered as blood bank?
21. What is the name of the air sacs present in the lungs?
22. Which part of the human body is also called as shock absorber?
23. Which gland is also called master gland?
24. Who was a renowned physicist and the founder of India's space programme?
25. Which scientist is known for his work concerning gravity?

B. MATCH THE FOLLOWING

(1 X 10=10)

- | | |
|---------------------------------------|---------------------|
| 1. Noble prize in physics | a. Masseter |
| 2. First reflecting telescope | b. pupil |
| 3. The strongest muscle | c. 22 yards apart |
| 4. Black disc in the eye | d. C.V.Raman |
| 5. Wickets | e. Sir Issac Newton |
| 6. Sunil Gavaskar | f. Courtney Walsh |
| 7. Rectangular area in middle ground | g. Chetan Sharma |
| 8. Test double century | h. Pitch |
| 9. First hatrick in World Cup cricket | i. 10,000 runs |
| 10. 500 wickets in Test cricket | j. Polly Umrigar |

C. WRITE YES OR NO

(1 X 5= 5)

1. We should not play with sharp objects. ()
2. We should talk to strangers freely. ()
3. We should cross the road at a zebra crossing. ()
4. We should not play with wires and plugs. ()
5. Cricket is played between two competing teams of 11 players. ()

D. WRITE THE MISSING NUMBERS OF THE SEQUENCE

(2 X 5=10)

- i. 1,3,5,7,_____,_____.
- ii. 1,4,9,16,_____,_____.
- iii. 11,13,17,19,_____,_____.
- iv. 60,55,50,45,_____,_____.
- v. 50,55,60,65,_____,_____.

E. IDENTIFY AND WRITE THE NAMES OF THE FOLLOWING PICTURES

(2 X 5=10)



A. WRITE THE WORD MEANINGS OF THE FOLLOWING WORDS

(2x10=20)

1. Patience-
2. Certain-
3. Utensils-
4. Greed-
5. Plenty-
6. Jester-
7. Bully-
8. Minutely-
9. Rude-
10. Politeness-

B. ANSWER THE FOLLOWING QUESTIONS

(2X5=10)

1. Why was the old man not able to see properly?
2. Why the father and the mother felt sorry?
3. What kind of person was King Hari Singh?
4. Why was the teacher angry with the other students?
5. Why was Dhaniram worried?

C. WRITE TRUE OR FALSE

(1x5=5)

1. The magic word was 'PIZZA'. ()
2. Lala Dhaniram was a teacher.()
3. Yoga does not help to stay calm and healthy. ()
4. Santolanasana (Plank Pose) helps to maintain body balance. ()
5. Parvatasana (Mountain pose) helps in relieving bachaches .()

D. MATCH THE FOLLOWING

(1x5=5)

- | | |
|------------------|-----------------------------|
| 1. Lala Dhaniram | a. cobbler |
| 2. Miss Kavita | b. others |
| 3. Respect | c. noble virtue |
| 4. Forgiveness | d. Std-III Sanskriti School |
| 5. Bhola | e. Big Merchant |

E. FILL IN THE BLANKS

(1x5=5)

1. It acts as an alternative system of _____
2. Yoga means the practice of _____.

3. Yoga sharpens the human _____.
4. The old man was not able to _____ properly.
5. Jester cracked very _____ jokes.

F.FIND THE CORRECT WORD

(1x5=5)

1. VKAATI
2. STJEER
3. YATNA
4. HDAARMIN
5. DICINEME

G.ANSWER ACCORDING TO THE QUESTION

(2.5 x 4=10)

1. Write two personal habits.
2. Write two behavioral habits.
3. Write two telephone manners.
4. Write two class rules.

ANNUAL EXAMINATION, 2023-24

SUBJECT: COMPUTER

FM - 60

A. Choose the correct option.

1×5=5

1. The unique address of a website is known as
(i) URL (ii) WWW (iii) Web page
2. How many basic steps are there in stepwise thinking?
(i) Two (ii) Four (iii) Three
3. _____ is the actor who acts on the stage.
(i) Sprite (ii) Stage (iii) Script
4. Which of the following can be connected to a smart TV?
(i) Chatbot (ii) Internet (iii) Tracker
5. Which of the following is the collection of blocks?
(i) Stage (ii) Website (iii) Script

B. Fill in the blanks.

1×5=5

6. A red button that stops a running program is _____ button.
7. The background in Scratch is also called _____.
8. _____ helps to change difficult task into a simple one.
9. _____ are used to open websites.
10. A _____ is a device that accepts our voice commands to plays music.

C. Write True/False.

1×5=5

11. Mozilla firefox is an example of URL.
12. Smart watch can monitor our hart beat.
13. You can add more than one sprite in a program.
14. Sound tab adds sound to the sprite and in backdrop.
15. The pages on internet are called home page.

D. Answer the following question. (short type)

1×5=5

16. Which is the full form of URL?
17. Which block adds speech and thought bubbles to the sprite?
18. Which is the fastest robot to solve a Rubik's Cube?
19. Write any one disadvantage of internet.
20. What is loop?

E. Answer the following question. (Long Type)

2×5=10

21. What are driverless cars?
22. What is formatting?
23. What are the basic requirements for an Internet connection?
24. Write any two functions of Smartwatches.
25. What is the use of Motion blocks?

ANNUAL EXAMINATION, 2023-24

SUBJECT: DRAWING

GRADE: A/B/C

Q.1 Draw a picture of 'PARROT' outline with black sketch pen and also colour it.

Or

Draw a picture of any 'FLOWER' outline with black sketch pen and also colour it.

Or

Draw a picture of 'FISHES' with colour